



Sketching Time on Analog Clocks (H)


Name: _____


Date: _____


Sketch each time on the clock face above it.


1. 
Midnight Noon
7:52 AM


2. 
Midnight Noon
5:46 AM


3. 
Midnight Noon
8:14 AM


4. 
Noon Midnight
5:44 PM


5. 
Midnight Noon
2:56 AM


6. 
Noon Midnight
10:00 PM


7. 
Midnight Noon
12:41 AM

8. 
Noon Midnight
7:51 PM

9. 
Noon Midnight
9:49 PM

10. 
Noon Midnight
3:08 PM

11. 
Midnight Noon
11:07 AM

12. 
Noon Midnight
12:25 PM

Sketching Time on Analog Clocks (H) Answers

Name: _____

Date: _____

Sketch each time on the clock face above it.

