







Sketching Time on Analog Clocks (J)




Name: _____




Date: _____




Sketch each time on the clock face above it.




1. 
Noon  8:59 PM  Midnight


2. 
Midnight  5:02 AM  Noon




3. 
Noon  11:37 PM  Midnight




4. 
Midnight  7:09 AM  Noon

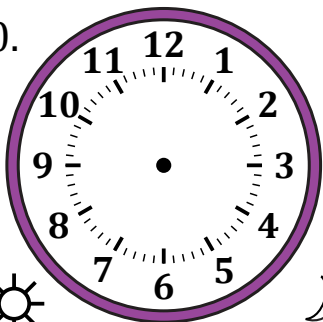


5. 
Noon  6:52 PM  Midnight

6. 
Midnight  1:52 AM  Noon




7. 
Noon  5:57 PM  Midnight

8. 
Midnight  2:31 AM  Noon

9. 
Midnight  10:46 AM  Noon

10. 
Noon  12:08 PM  Midnight

11. 
Noon  3:45 PM  Midnight

12. 
Midnight  9:52 AM  Noon

Sketching Time on Analog Clocks (J) Answers

Name: _____

Date: _____

Sketch each time on the clock face above it.

