







Sketching Time on Analog Clocks (C)




Name: _____




Date: _____




Sketch each time on the clock face above it.




1. 
Noon  10:05 PM  Midnight




2. 
Noon  7:25 PM  Midnight




3. 
Noon  12:20 PM  Midnight




4. 
Noon  9:35 PM  Midnight




5. 
Midnight  4:55 AM  Noon




6. 
Noon  5:10 PM  Midnight




7. 
Midnight  3:00 AM  Noon

8. 
Midnight  11:40 AM  Noon

9. 
Midnight  9:50 AM  Noon

10. 
Midnight  7:15 AM  Noon

11. 
Noon  2:30 PM  Midnight

12. 
Midnight  12:45 AM  Noon

Sketching Time on Analog Clocks (C) Answers

Name: _____

Date: _____

Sketch each time on the clock face above it.

