







Sketching Time on Analog Clocks (B)




Name: _____




Date: _____




Sketch each time on the clock face above it.




1. 
Noon  2:45 PM  Midnight




2. 
Midnight  8:15 AM  Noon

3. 
Midnight  6:00 AM  Noon




4. 
Midnight  12:30 AM  Noon

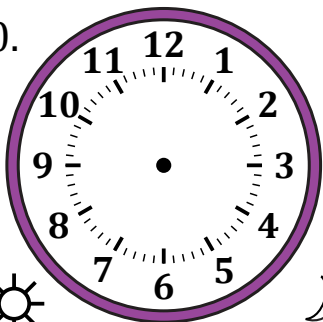


5. 
Midnight  3:00 AM  Noon




6. 
Noon  6:45 PM  Midnight




7. 
Noon  9:45 PM  Midnight

8. 
Noon  5:30 PM  Midnight

9. 
Noon  12:30 PM  Midnight

10. 
Noon  10:15 PM  Midnight

11. 
Midnight  5:00 AM  Noon

12. 
Midnight  11:15 AM  Noon

Sketching Time on Analog Clocks (B) Answers

Name: _____

Date: _____

Sketch each time on the clock face above it.

