







# Sketching Time on Analog Clocks (B)




Name: \_\_\_\_\_




Date: \_\_\_\_\_




Sketch each time on the clock face above it.




1.   
Noon  2:45 PM  Midnight




2.   
Midnight  8:15 AM  Noon

3.   
Midnight  6:00 AM  Noon




4.   
Midnight  12:30 AM  Noon

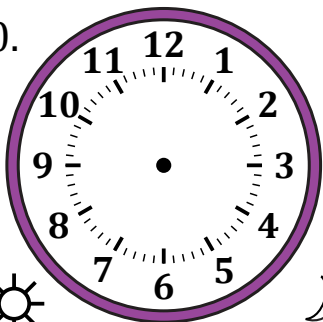


5.   
Midnight  3:00 AM  Noon




6.   
Noon  6:45 PM  Midnight




7.   
Noon  9:45 PM  Midnight

8.   
Noon  5:30 PM  Midnight

9.   
Noon  12:30 PM  Midnight

10.   
Noon  10:15 PM  Midnight

11.   
Midnight  5:00 AM  Noon

12.   
Midnight  11:15 AM  Noon