







Sketching Time on Analog Clocks (C)




Name: _____




Date: _____




Sketch each time on the clock face above it.




1. 
Noon  8:15 PM  Midnight




2. 
Noon  4:45 PM  Midnight




3. 
Midnight  6:15 AM  Noon




4. 
Midnight  10:30 AM  Noon




5. 
Midnight  3:45 AM  Noon

6. 
Noon  3:15 PM  Midnight




7. 
Midnight  5:00 AM  Noon

8. 
Noon  12:30 PM  Midnight

9. 
Midnight  1:00 AM  Noon

10. 
Midnight  9:00 AM  Noon

11. 
Noon  6:30 PM  Midnight

12. 
Noon  11:45 PM  Midnight

Sketching Time on Analog Clocks (C) Answers

Name: _____

Date: _____

Sketch each time on the clock face above it.

