







# Sketching Time on Analog Clocks (E)




Name: \_\_\_\_\_




Date: \_\_\_\_\_




Sketch each time on the clock face above it.




1.   
Noon  11:30 PM  Midnight




2.   
Midnight  2:15 AM  Noon




3.   
Midnight  7:45 AM  Noon




4.   
Noon  1:45 PM  Midnight




5.   
Midnight  8:00 AM  Noon




6.   
Noon  6:00 PM  Midnight




7.   
Midnight  10:15 AM  Noon

8.   
Midnight  12:30 AM  Noon

9.   
Noon  3:30 PM  Midnight

10.   
Noon  5:45 PM  Midnight

11.   
Noon  8:15 PM  Midnight

12.   
Midnight  5:00 AM  Noon

# Sketching Time on Analog Clocks (E) Answers

Name: \_\_\_\_\_

Date: \_\_\_\_\_

Sketch each time on the clock face above it.

