



Sketching Time on Analog Clocks (I)


Name: _____


Date: _____


Sketch each time on the clock face above it.


1. 
Noon 2:15 PM Midnight


2. 
Midnight 12:00 AM Noon


3. 
Noon 9:00 PM Midnight


4. 
Noon 7:00 PM Midnight


5. 
Midnight 4:30 AM Noon


6. 
Midnight 7:30 AM Noon


7. 
Midnight 2:45 AM Noon

8. 
Midnight 9:30 AM Noon

9. 
Midnight 10:45 AM Noon

10. 
Noon 5:15 PM Midnight

11. 
Noon 1:45 PM Midnight

12. 
Noon 10:15 PM Midnight

Sketching Time on Analog Clocks (I) Answers

Name: _____

Date: _____

Sketch each time on the clock face above it.

