







Sketching Time on Analog Clocks (A)

Name: _____




Date: _____




Sketch each time on the clock face above it.




1. 
Midnight  Noon 
9:30 AM




2. 
Midnight  Noon 
6:00 AM




3. 
Noon  Midnight 
7:30 PM




4. 
Midnight  Noon 
11:00 AM

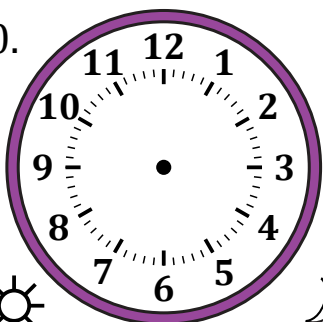


5. 
Midnight  Noon 
12:00 AM




6. 
Noon  Midnight 
11:30 PM




7. 
Noon  Midnight 
4:00 PM

8. 
Noon  Midnight 
1:30 PM

9. 
Midnight  Noon 
3:00 AM

10. 
Noon  Midnight 
9:30 PM

11. 
Midnight  Noon 
5:30 AM

12. 
Noon  Midnight 
2:00 PM