



Sketching Time on Analog Clocks (B)


Name: _____


Date: _____


Sketch each time on the clock face above it.


1. 
Noon Midnight
10:30 PM


2. 
Noon Midnight
12:00 PM


3. 
Midnight Noon
6:30 AM


4. 
Noon Midnight
6:30 PM


5. 
Noon Midnight
5:00 PM


6. 
Midnight Noon
9:00 AM


7. 
Noon Midnight
3:30 PM

8. 
Midnight Noon
5:30 AM

9. 
Midnight Noon
1:30 AM

10. 
Noon Midnight
8:00 PM

11. 
Midnight Noon
10:00 AM

12. 
Midnight Noon
3:00 AM

Sketching Time on Analog Clocks (B) Answers

Name: _____

Date: _____

Sketch each time on the clock face above it.

