







Sketching Time on Analog Clocks (C)




Name: _____




Date: _____




Sketch each time on the clock face above it.




1. 
Noon  4:00 PM  Midnight




2. 
Noon  7:00 PM  Midnight




3. 
Midnight  7:00 AM  Noon




4. 
Midnight  4:00 AM  Noon




5. 
Midnight  10:00 AM  Noon

6. 
Noon  9:00 PM  Midnight




7. 
Noon  11:00 PM  Midnight

8. 
Midnight  12:00 AM  Noon

9. 
Midnight  9:00 AM  Noon

10. 
Noon  1:00 PM  Midnight

11. 
Noon  2:00 PM  Midnight

12. 
Midnight  2:00 AM  Noon

Sketching Time on Analog Clocks (C) Answers

Name: _____

Date: _____

Sketch each time on the clock face above it.

