



# Sketching Time on Analog Clocks (B)


Name: \_\_\_\_\_


Date: \_\_\_\_\_


Sketch each time on the clock face above it.


1.   
Noon 5:06:14 PM Midnight


2.   
Midnight 4:11:09 AM Noon


3.   
Midnight 12:19:14 AM Noon


4.   
Noon 8:48:08 PM Midnight


5.   
Noon 12:16:45 PM Midnight


6.   
Midnight 2:12:32 AM Noon

7.   
Noon 11:50:35 PM Midnight

8.   
Noon 2:42:02 PM Midnight

9.   
Midnight 7:34:32 AM Noon

10.   
Midnight 8:02:27 AM Noon

11.   
Noon 6:31:41 PM Midnight

12.   
Midnight 10:49:39 AM Noon

# Sketching Time on Analog Clocks (B) Answers

Name: \_\_\_\_\_

Date: \_\_\_\_\_

Sketch each time on the clock face above it.

