



Sketching Time on Analog Clocks (C)


Name: _____


Date: _____


Sketch each time on the clock face above it.


1. 
Noon 5:41:18 PM Midnight


2. 
Noon 2:16:19 PM Midnight


3. 
Midnight 2:41:22 AM Noon

4. 
Midnight 9:09:20 AM Noon

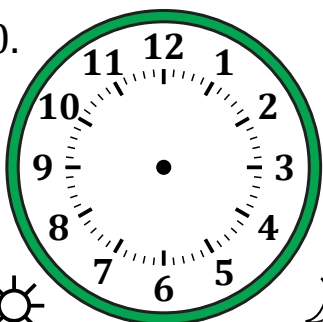
5. 
Midnight 6:23:36 AM Noon

6. 
Noon 8:31:50 PM Midnight

7. 
Midnight 12:45:34 AM Noon

8. 
Midnight 11:44:46 AM Noon

9. 
Noon 10:52:02 PM Midnight

10. 
Noon 6:51:52 PM Midnight

11. 
Noon 1:43:59 PM Midnight

12. 
Midnight 4:13:27 AM Noon

Sketching Time on Analog Clocks (C) Answers

Name: _____

Date: _____

Sketch each time on the clock face above it.

