



Sketching Time on Analog Clocks (D)


Name: _____


Date: _____

Sketch each time on the clock face above it.


1. 
Noon 8:11:54 PM Midnight


2. 
Midnight 3:25:27 AM Noon


3. 
Midnight 7:01:18 AM Noon


4. 
Midnight 12:34:25 AM Noon

5. 
Noon 5:38:37 PM Midnight

6. 
Midnight 11:26:11 AM Noon

7. 
Noon 11:54:36 PM Midnight

8. 
Noon 3:12:25 PM Midnight

9. 
Noon 1:29:01 PM Midnight

10. 
Noon 7:02:35 PM Midnight

11. 
Midnight 4:32:01 AM Noon

12. 
Midnight 9:14:04 AM Noon

Sketching Time on Analog Clocks (D) Answers

Name: _____

Date: _____

Sketch each time on the clock face above it.

