


Sketching Time on Analog Clocks (E)


Name: _____


Date: _____

Sketch each time on the clock face above it.


1. 
Noon 7:17:18 PM Midnight


2. 
Midnight 8:35:31 AM Noon

3. 
Midnight 10:34:01 AM Noon


4. 
Noon 5:01:16 PM Midnight

5. 
Noon 10:14:07 PM Midnight

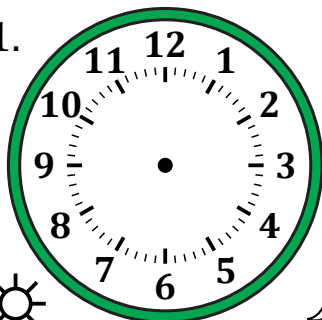
6. 
Midnight 7:27:21 AM Noon

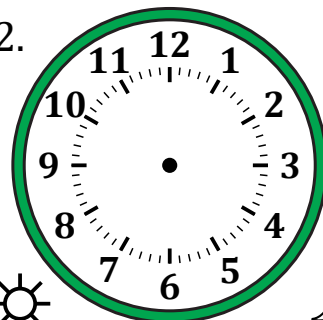
7. 
Midnight 5:38:32 AM Noon

8. 
Midnight 12:31:10 AM Noon

9. 
Noon 3:11:41 PM Midnight

10. 
Midnight 3:59:55 AM Noon

11. 
Noon 1:22:54 PM Midnight

12. 
Noon 8:32:07 PM Midnight

Sketching Time on Analog Clocks (E) Answers

Name: _____

Date: _____

Sketch each time on the clock face above it.

1. 

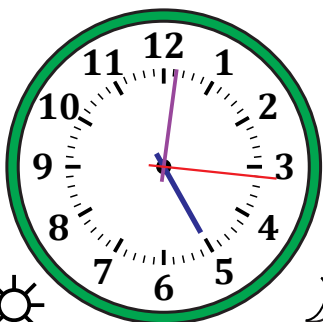
Noon
Midnight
7:17:18 PM

2. 

Midnight
Noon
8:35:31 AM

3. 


Midnight
Noon
10:34:01 AM

4. 

Noon
Midnight
5:01:16 PM

5. 

Noon
Midnight
10:14:07 PM

6. 


Midnight
Noon
7:27:21 AM

7. 

Midnight
Noon
5:38:32 AM

8. 


Midnight
Noon
12:31:10 AM

9. 

Noon
Midnight
3:11:41 PM

10. 

Midnight
Noon
3:59:55 AM

11. 

Noon
Midnight
1:22:54 PM

12. 

Noon
Midnight
8:32:07 PM