



Sketching Time on Analog Clocks (G)


Name: _____


Date: _____

Sketch each time on the clock face above it.


1. 
Midnight 4:29:58 AM Noon


2. 
Midnight 6:24:08 AM Noon


3. 
Noon 12:43:58 PM Midnight


4. 
Midnight 1:31:13 AM Noon

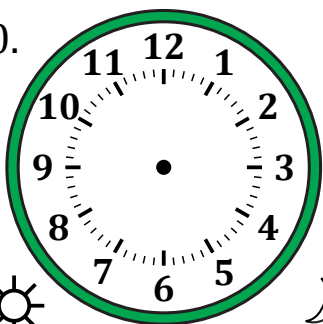
5. 
Noon 10:03:58 PM Midnight

6. 
Midnight 11:06:53 AM Noon


7. 
Noon 5:07:30 PM Midnight

8. 
Noon 6:54:14 PM Midnight

9. 
Midnight 3:55:41 AM Noon

10. 
Noon 3:16:29 PM Midnight

11. 
Noon 9:50:48 PM Midnight

12. 
Midnight 9:16:03 AM Noon

Sketching Time on Analog Clocks (G) Answers

Name: _____

Date: _____

Sketch each time on the clock face above it.

