



Sketching Time on Analog Clocks (I)


Name: _____


Date: _____


Sketch each time on the clock face above it.


1. 
Noon 9:24:31 PM Midnight


2. 
Noon 3:34:26 PM Midnight


3. 
Midnight 9:54:24 AM Noon


4. 
Midnight 11:25:05 AM Noon

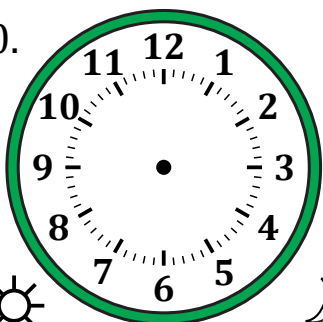
5. 
Noon 6:37:19 PM Midnight

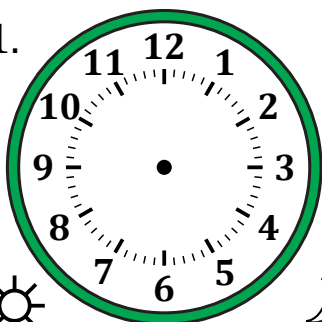
6. 
Midnight 12:40:53 AM Noon


7. 
Noon 10:38:11 PM Midnight

8. 
Midnight 5:34:03 AM Noon

9. 
Midnight 2:32:40 AM Noon

10. 
Noon 4:58:29 PM Midnight

11. 
Noon 1:16:07 PM Midnight

12. 
Midnight 6:37:39 AM Noon

Sketching Time on Analog Clocks (I) Answers

Name: _____

Date: _____

Sketch each time on the clock face above it.

