


# Sketching Time on Analog Clocks (J)


Name: \_\_\_\_\_


Date: \_\_\_\_\_

Sketch each time on the clock face above it.


1.   
Noon 10:46:57 PM Midnight


2.   
Midnight 6:06:57 AM Noon


3.   
Midnight 11:24:00 AM Noon

4.   
Midnight 9:40:01 AM Noon


5.   
Noon 3:03:07 PM Midnight

6.   
Midnight 5:38:23 AM Noon

7.   
Noon 6:57:22 PM Midnight

8.   
Noon 1:41:32 PM Midnight

9.   
Noon 5:40:11 PM Midnight

10.   
Midnight 3:48:32 AM Noon

11.   
Midnight 1:39:18 AM Noon

12.   
Noon 8:54:26 PM Midnight

# Sketching Time on Analog Clocks (J) Answers

Name: \_\_\_\_\_

Date: \_\_\_\_\_

Sketch each time on the clock face above it.

