





Sketching Time on Analog Clocks (A)




Name: _____




Date: _____




Sketch each time on the clock face above it.


1. 
Noon  10:39:15 PM  Midnight




2. 
Noon  1:04:20 PM  Midnight




3. 
Midnight  10:19:10 AM  Noon




4. 
Midnight  2:50:50 AM  Noon




5. 
Midnight  5:22:30 AM  Noon

6. 
Noon  6:36:55 PM  Midnight

7. 
Midnight  12:36:35 AM  Noon

8. 
Noon  8:32:45 PM  Midnight

9. 
Midnight  9:40:25 AM  Noon

10. 
Midnight  7:26:40 AM  Noon

11. 
Noon  3:33:00 PM  Midnight

12. 
Noon  4:07:05 PM  Midnight