

Sketching Time on Analog Clocks (A)

Name: _____

Date: _____

Sketch each time on the clock face above it.

1.



2.



3.



4.



Sketching Time on Analog Clocks (A) Answers

Name: _____

Date: _____

Sketch each time on the clock face above it.

1.



2.



3.



4.




Sketching Time on Analog Clocks (B)

Name: _____

Date: _____

Sketch each time on the clock face above it.


1.



2.



3.



4.




Sketching Time on Analog Clocks (B) Answers

Name: _____

Date: _____

Sketch each time on the clock face above it.

1.




Midnight

11:58:00 AM

Noon

2.




Noon

3:27:25 PM

Midnight

3.

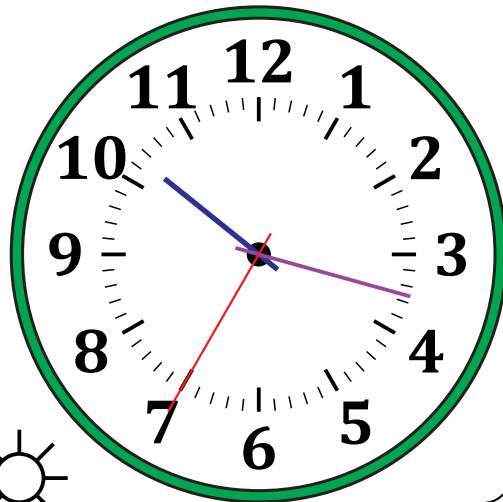


Midnight

4:04:50 AM

Noon

4.



Noon

10:17:35 PM

Midnight

Sketching Time on Analog Clocks (C)

Name: _____


Date: _____

Sketch each time on the clock face above it.


1.




2.



3.



4.



Sketching Time on Analog Clocks (C) Answers

Name: _____

Date: _____

Sketch each time on the clock face above it.

1.




2.



3.



4.



Sketching Time on Analog Clocks (D)

Name: _____


Date: _____

Sketch each time on the clock face above it.

1.




2.



3.



4.



Sketching Time on Analog Clocks (D) Answers

Name: _____

Date: _____

Sketch each time on the clock face above it.

1.



2.



3.



4.




Sketching Time on Analog Clocks (E)

Name: _____

Date: _____

Sketch each time on the clock face above it.

1.



2.



3.



4.



Sketching Time on Analog Clocks (E) Answers

Name: _____

Date: _____

Sketch each time on the clock face above it.

1.



2.



3.



4.




Sketching Time on Analog Clocks (F)

Name: _____

Date: _____

Sketch each time on the clock face above it.

1.



Midnight

Noon

8:55:25 AM

An analog clock face with numbers 1 through 12. The hands are not drawn. To the left of the clock is a crescent moon icon labeled "Midnight". To the right is a sun icon labeled "Noon". Below the clock is the time "8:55:25 AM" underlined.

2.




Noon

Midnight

7:31:50 PM

An analog clock face with numbers 1 through 12. The hands are not drawn. To the left of the clock is a sun icon labeled "Noon". To the right is a crescent moon icon labeled "Midnight". Below the clock is the time "7:31:50 PM" underlined.

3.



Midnight

Noon

3:38:40 AM

An analog clock face with numbers 1 through 12. The hands are not drawn. To the left of the clock is a crescent moon icon labeled "Midnight". To the right is a sun icon labeled "Noon". Below the clock is the time "3:38:40 AM" underlined.

4.



Noon

Midnight

4:40:10 PM

An analog clock face with numbers 1 through 12. The hands are not drawn. To the left of the clock is a sun icon labeled "Noon". To the right is a crescent moon icon labeled "Midnight". Below the clock is the time "4:40:10 PM" underlined.


Sketching Time on Analog Clocks (F) Answers

Name: _____

Date: _____

Sketch each time on the clock face above it.

1.

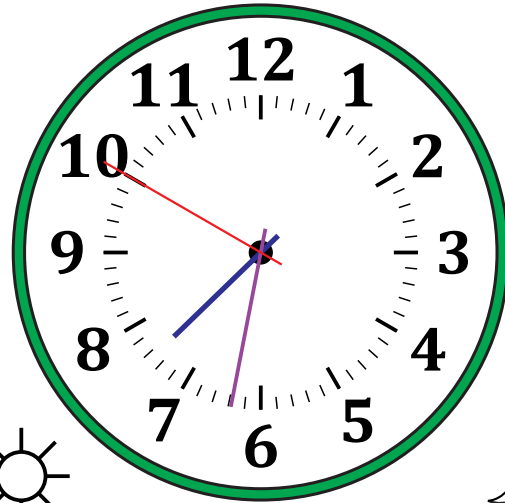


Midnight

8:55:25 AM

Noon

2.




Noon

7:31:50 PM

Midnight

3.

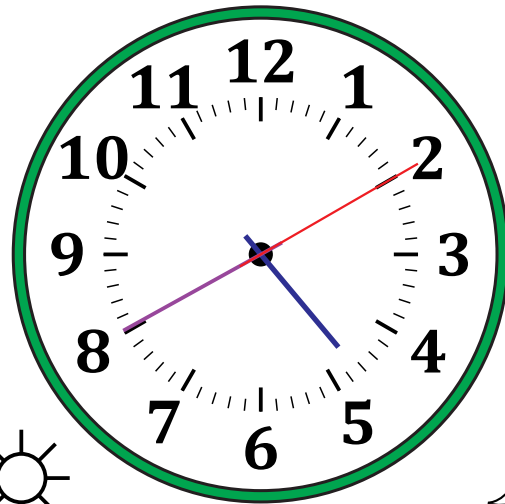


Midnight

3:38:40 AM

Noon

4.



Noon

4:40:10 PM

Midnight


Sketching Time on Analog Clocks (G)

Name: _____

Date: _____

Sketch each time on the clock face above it.

1.




2.



3.



4.




Sketching Time on Analog Clocks (G) Answers

Name: _____

Date: _____

Sketch each time on the clock face above it.

1.

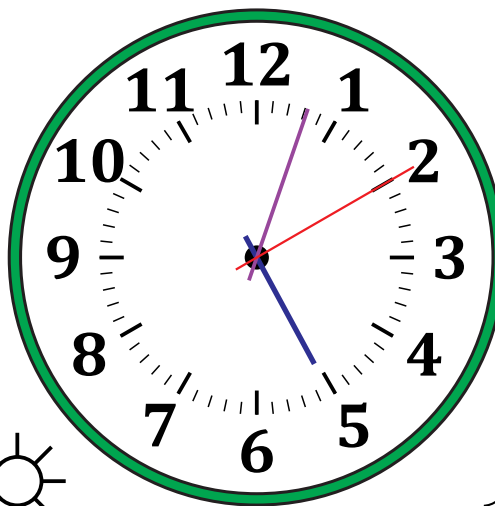


Midnight

Noon

4:11:15 AM

2.

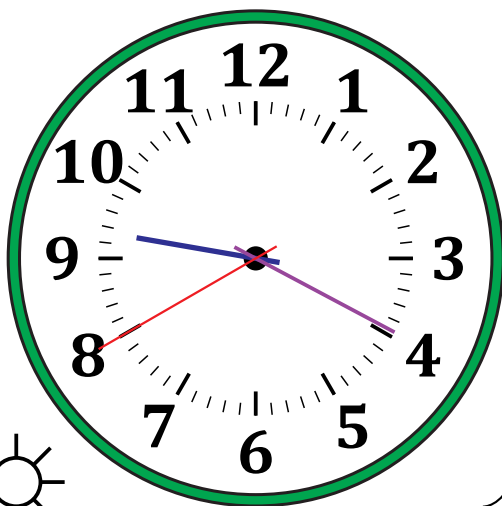


Noon

Midnight

5:03:10 PM

3.




Noon

Midnight

9:19:40 PM

4.



Midnight

Noon

10:09:55 AM


Sketching Time on Analog Clocks (H)

Name: _____

Date: _____

Sketch each time on the clock face above it.

1.




2.



3.



4.




Sketching Time on Analog Clocks (H) Answers

Name: _____

Date: _____

Sketch each time on the clock face above it.

1.

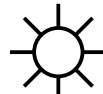
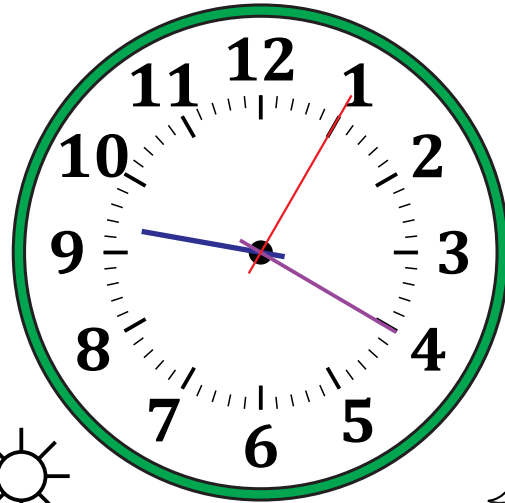


Midnight

8:54:20 AM

Noon

2.


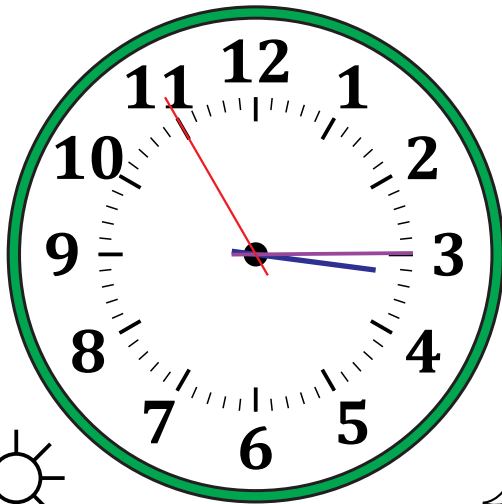


Noon

9:20:05 PM

Midnight

3.




Noon

3:14:55 PM



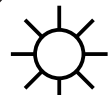
Midnight

4.



Midnight

2:14:35 AM



Noon

Sketching Time on Analog Clocks (I)

Name: _____

Date: _____

Sketch each time on the clock face above it.


1.



2.



3.



4.



Sketching Time on Analog Clocks (I) Answers

Name: _____


Date: _____

Sketch each time on the clock face above it.

1.



2.



3.



4.



Sketching Time on Analog Clocks (J)

Name: _____


Date: _____

Sketch each time on the clock face above it.

1.




2.



3.



4.



Sketching Time on Analog Clocks (J) Answers

Name: _____

Date: _____

Sketch each time on the clock face above it.

1.



2.



3.



4.

