



# Sketching Time on Analog Clocks (A)


Name: \_\_\_\_\_


Date: \_\_\_\_\_


Sketch each time on the clock face above it.


1.   
Noon 7:16:15 PM Midnight

2.   
Noon 2:26:45 PM Midnight


3.   
Midnight 4:40:45 AM Noon


4.   
Midnight 12:52:30 AM Noon


5.   
Midnight 6:30:15 AM Noon


6.   
Midnight 11:54:15 AM Noon

7.   
Noon 5:30:30 PM Midnight

8.   
Midnight 3:17:30 AM Noon

9.   
Noon 10:44:45 PM Midnight

10.   
Noon 12:58:00 PM Midnight

11.   
Midnight 9:27:00 AM Noon

12.   
Noon 8:43:00 PM Midnight

# Sketching Time on Analog Clocks (A) Answers

Name: \_\_\_\_\_

Date: \_\_\_\_\_

Sketch each time on the clock face above it.

