



Sketching Time on Analog Clocks (A)


Name: _____


Date: _____


Sketch each time on the clock face above it.


1. 
Noon 7:16:15 PM Midnight


2. 
Noon 2:26:45 PM Midnight


3. 
Midnight 4:40:45 AM Noon


4. 
Midnight 12:52:30 AM Noon

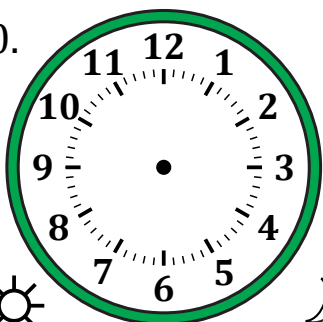
5. 
Midnight 6:30:15 AM Noon


6. 
Midnight 11:54:15 AM Noon

7. 
Noon 5:30:30 PM Midnight

8. 
Midnight 3:17:30 AM Noon

9. 
Noon 10:44:45 PM Midnight

10. 
Noon 12:58:00 PM Midnight

11. 
Midnight 9:27:00 AM Noon

12. 
Noon 8:43:00 PM Midnight