







Sketching Time on Analog Clocks (I)




Name: _____




Date: _____

Sketch each time on the clock face above it.




1. 
Noon  4:32:15 PM  Midnight




2. 
Noon  12:15:00 PM  Midnight




3. 
Midnight  7:45:30 AM  Noon



4. 
Midnight  5:28:15 AM  Noon

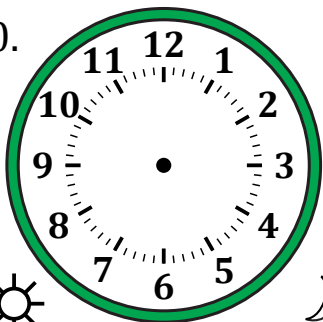


5. 
Noon  2:53:45 PM  Midnight

6. 
Noon  9:24:00 PM  Midnight

7. 
Midnight  12:26:15 AM  Noon

8. 
Midnight  8:43:45 AM  Noon

9. 
Midnight  10:16:30 AM  Noon

10. 
Noon  11:35:00 PM  Midnight

11. 
Noon  7:08:30 PM  Midnight

12. 
Midnight  3:01:45 AM  Noon

Sketching Time on Analog Clocks (I) Answers

Name: _____

Date: _____

Sketch each time on the clock face above it.

