




# Sketching Time on Analog Clocks (I)




Name: \_\_\_\_\_




Date: \_\_\_\_\_

Sketch each time on the clock face above it.



1.   
Noon  4:32:15 PM  Midnight




2.   
Noon  12:15:00 PM  Midnight




3.   
Midnight  7:45:30 AM  Noon


4.   
Midnight  5:28:15 AM  Noon

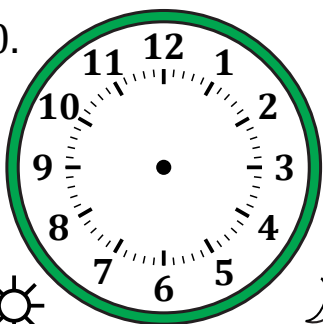


5.   
Noon  2:53:45 PM  Midnight

6.   
Noon  9:24:00 PM  Midnight

7.   
Midnight  12:26:15 AM  Noon

8.   
Midnight  8:43:45 AM  Noon

9.   
Midnight  10:16:30 AM  Noon

10.   
Noon  11:35:00 PM  Midnight

11.   
Noon  7:08:30 PM  Midnight

12.   
Midnight  3:01:45 AM  Noon