



# Sketching Time on Analog Clocks (A)


Name: \_\_\_\_\_


Date: \_\_\_\_\_


Sketch each time on the clock face above it.


1.   
Noon 11:37:00 PM Midnight


2.   
Noon 12:33:00 PM Midnight


3.   
Midnight 4:43:00 AM Noon


4.   
Midnight 7:49:30 AM Noon


5.   
Noon 2:42:30 PM Midnight

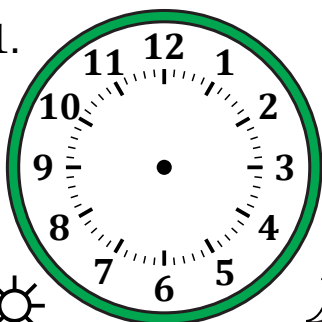
6.   
Noon 5:14:00 PM Midnight

7.   
Noon 6:53:00 PM Midnight

8.   
Midnight 3:35:30 AM Noon

9.   
Midnight 11:05:00 AM Noon

10.   
Midnight 12:17:30 AM Noon

11.   
Noon 9:27:30 PM Midnight

12.   
Midnight 9:29:30 AM Noon

# Sketching Time on Analog Clocks (A) Answers

Name: \_\_\_\_\_

Date: \_\_\_\_\_

Sketch each time on the clock face above it.

