



Sketching Time on Analog Clocks (A)


Name: _____


Date: _____

Sketch each time on the clock face above it.


1. 
Noon 11:37:00 PM Midnight


2. 
Noon 12:33:00 PM Midnight

3. 
Midnight 4:43:00 AM Noon


4. 
Midnight 7:49:30 AM Noon


5. 
Noon 2:42:30 PM Midnight

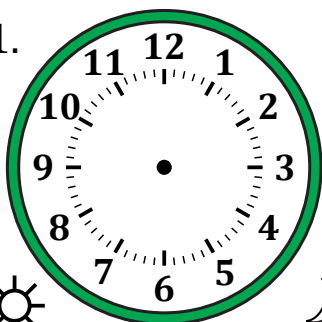
6. 
Noon 5:14:00 PM Midnight


7. 
Noon 6:53:00 PM Midnight

8. 
Midnight 3:35:30 AM Noon

9. 
Midnight 11:05:00 AM Noon

10. 
Midnight 12:17:30 AM Noon

11. 
Noon 9:27:30 PM Midnight

12. 
Midnight 9:29:30 AM Noon