



Sketching Time on Analog Clocks (B)


Name: _____


Date: _____


Sketch each time on the clock face above it.


1. 
Midnight 4:03:30 AM Noon


2. 
Midnight 8:42:30 AM Noon


3. 
Midnight 3:57:00 AM Noon


4. 
Noon 4:03:30 PM Midnight

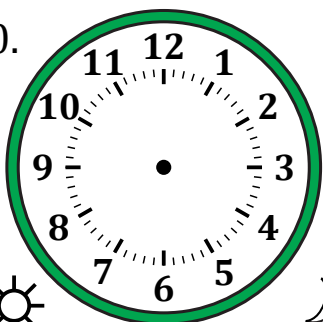
5. 
Noon 2:52:00 PM Midnight

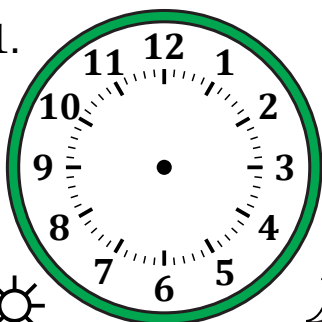
6. 
Midnight 7:19:30 AM Noon

7. 
Noon 6:27:00 PM Midnight

8. 
Midnight 10:37:30 AM Noon

9. 
Midnight 12:44:00 AM Noon

10. 
Noon 11:00:30 PM Midnight

11. 
Noon 8:51:00 PM Midnight

12. 
Noon 12:23:00 PM Midnight