











Sketching Time on Analog Clocks (E)

Name: _____

Date: _____

Sketch each time on the clock face above it.



Sketching Time on Analog Clocks (E) Answers

Name: _____

Date: _____

Sketch each time on the clock face above it.

1. 
 Midnight Noon
5:21:00 AM

2. 
 Noon Midnight
7:18:30 PM

3. 
 Midnight Noon
3:06:00 AM

4. 
 Noon Midnight
4:26:30 PM

5. 
 Noon Midnight
2:32:30 PM

6. 
 Midnight Noon
9:42:00 AM

7. 
 Noon Midnight
9:08:30 PM

8. 
 Midnight Noon
11:59:30 AM

9. 
 Midnight Noon
7:18:30 AM

10. 
 Noon Midnight
11:59:00 PM

11. 
 Noon Midnight
1:18:00 PM

12. 
 Midnight Noon
1:55:00 AM