



Sketching Time on Analog Clocks (H)


Name: _____


Date: _____


Sketch each time on the clock face above it.


1. 
Midnight 12:55:00 AM Noon


2. 
Midnight 9:17:30 AM Noon


3. 
Noon 3:51:30 PM Midnight

4. 
Noon 11:33:30 PM Midnight


5. 
Noon 9:51:30 PM Midnight


6. 
Midnight 6:58:00 AM Noon

7. 
Noon 6:07:00 PM Midnight

8. 
Midnight 3:19:00 AM Noon

9. 
Noon 5:10:00 PM Midnight

10. 
Noon 1:22:30 PM Midnight

11. 
Midnight 5:01:30 AM Noon

12. 
Midnight 10:18:00 AM Noon

Sketching Time on Analog Clocks (H) Answers

Name: _____

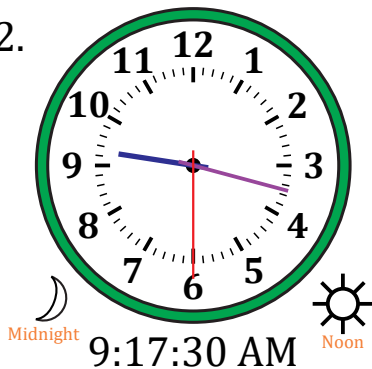
Date: _____

Sketch each time on the clock face above it.

1.



2.



3.



4.



5.




6.



7.



8.



9.



10.



11.



12.

