



Sketching Time on Analog Clocks (I)


Name: _____


Date: _____


Sketch each time on the clock face above it.


1. 
Noon 5:27:30 PM Midnight


2. 
Noon 10:47:00 PM Midnight


3. 
Noon 6:52:30 PM Midnight


4. 
Noon 9:49:00 PM Midnight

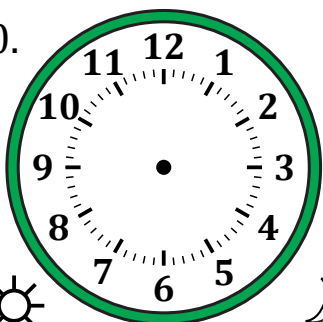
5. 
Midnight 12:58:00 AM Noon


6. 
Midnight 5:16:30 AM Noon


7. 
Noon 1:40:00 PM Midnight

8. 
Midnight 11:40:30 AM Noon

9. 
Midnight 7:39:00 AM Noon

10. 
Noon 2:17:30 PM Midnight

11. 
Midnight 8:15:00 AM Noon

12. 
Midnight 3:45:30 AM Noon

Sketching Time on Analog Clocks (I) Answers

Name: _____

Date: _____

Sketch each time on the clock face above it.

