



Sketching Time on Analog Clocks (J)


Name: _____


Date: _____


Sketch each time on the clock face above it.


1. 
Noon 1:59:00 PM Midnight


2. 
Noon 6:31:00 PM Midnight

3. 
Midnight 3:01:00 AM Noon


4. 
Midnight 12:04:30 AM Noon


5. 
Midnight 8:21:30 AM Noon


6. 
Midnight 11:42:30 AM Noon

7. 
Midnight 7:06:30 AM Noon

8. 
Midnight 5:01:00 AM Noon

9. 
Noon 8:00:00 PM Midnight

10. 
Noon 2:07:00 PM Midnight

11. 
Noon 11:18:30 PM Midnight

12. 
Noon 4:37:30 PM Midnight

Sketching Time on Analog Clocks (J) Answers

Name: _____

Date: _____

Sketch each time on the clock face above it.

