



Sketching Time on Analog Clocks (F)

Name: _____

Date: _____

Sketch each time on the clock face above it.

1.

Midnight   Noon

11:09:00 AM

Detailed description: A circular analog clock face with a green border. The numbers 1 through 12 are arranged around the perimeter. The clock is intended to be sketched for 11:09:00 AM. Below the clock, there is a moon icon on the left labeled 'Midnight' and a sun icon on the right labeled 'Noon'. The time '11:09:00 AM' is written below the clock and underlined.

2.

Midnight   Noon

12:19:30 AM

Detailed description: A circular analog clock face with a green border. The numbers 1 through 12 are arranged around the perimeter. The clock is intended to be sketched for 12:19:30 AM. Below the clock, there is a moon icon on the left labeled 'Midnight' and a sun icon on the right labeled 'Noon'. The time '12:19:30 AM' is written below the clock and underlined.



3.

Noon   Midnight

12:04:30 PM

Detailed description: A circular analog clock face with a green border. The numbers 1 through 12 are arranged around the perimeter. The clock is intended to be sketched for 12:04:30 PM. Below the clock, there is a sun icon on the left labeled 'Noon' and a moon icon on the right labeled 'Midnight'. The time '12:04:30 PM' is written below the clock and underlined.

4.

Noon   Midnight

10:09:00 PM

Detailed description: A circular analog clock face with a green border. The numbers 1 through 12 are arranged around the perimeter. The clock is intended to be sketched for 10:09:00 PM. Below the clock, there is a sun icon on the left labeled 'Noon' and a moon icon on the right labeled 'Midnight'. The time '10:09:00 PM' is written below the clock and underlined.


Sketching Time on Analog Clocks (F) Answers

Name: _____

Date: _____

Sketch each time on the clock face above it.

1.



2.



3.



4.

