





# Valentine's Day Chocolates Mystery - Sums to 198 (E)

Instructions: Find out how many chocolates are in the candy box. Any sum over 94 counts as one.

$$\begin{array}{r} 71 \\ + 52 \\ \hline \end{array}$$

$$\begin{array}{r} 48 \\ + 27 \\ \hline \end{array}$$
$$\begin{array}{r} 46 \\ + 25 \\ \hline \end{array}$$
$$\begin{array}{r} 83 \\ + 63 \\ \hline \end{array}$$

$$\begin{array}{r} 94 \\ + 13 \\ \hline \end{array}$$

$$\begin{array}{r} 33 \\ + 39 \\ \hline \end{array}$$
$$\begin{array}{r} 32 \\ + 58 \\ \hline \end{array}$$
$$\begin{array}{r} 76 \\ + 58 \\ \hline \end{array}$$
$$\begin{array}{r} 41 \\ + 64 \\ \hline \end{array}$$
$$\begin{array}{r} 57 \\ + 40 \\ \hline \end{array}$$

$$\begin{array}{r} 73 \\ + 94 \\ \hline \end{array}$$

$$\begin{array}{r} 86 \\ + 71 \\ \hline \end{array}$$
$$\begin{array}{r} 97 \\ + 93 \\ \hline \end{array}$$

$$\begin{array}{r} 74 \\ + 12 \\ \hline \end{array}$$
$$\begin{array}{r} 79 \\ + 77 \\ \hline \end{array}$$

$$\begin{array}{r} 63 \\ + 40 \\ \hline \end{array}$$

$$\begin{array}{r} 63 \\ + 37 \\ \hline \end{array}$$

$$\begin{array}{r} 71 \\ + 63 \\ \hline \end{array}$$


$$\begin{array}{r} 99 \\ + 92 \\ \hline \end{array}$$

$$\begin{array}{r} 64 \\ + 75 \\ \hline \end{array}$$

$$\begin{array}{r} 23 \\ + 49 \\ \hline \end{array}$$

How many chocolates are in the candy box?

Answer: