





Valentine's Day Chocolates Mystery - Sums to 1998 (A)

Instructions: Find out how many chocolates are in the candy box. Any sum over 999 counts as one.

$$\begin{array}{r} 982 \\ + 734 \\ \hline \end{array}$$

$$\begin{array}{r} 112 \\ + 593 \\ \hline \end{array}$$
$$\begin{array}{r} 581 \\ + 484 \\ \hline \end{array}$$
$$\begin{array}{r} 632 \\ + 140 \\ \hline \end{array}$$

$$\begin{array}{r} 686 \\ + 519 \\ \hline \end{array}$$

$$\begin{array}{r} 164 \\ + 109 \\ \hline \end{array}$$
$$\begin{array}{r} 337 \\ + 125 \\ \hline \end{array}$$
$$\begin{array}{r} 125 \\ + 995 \\ \hline \end{array}$$
$$\begin{array}{r} 752 \\ + 790 \\ \hline \end{array}$$
$$\begin{array}{r} 990 \\ + 350 \\ \hline \end{array}$$

$$\begin{array}{r} 553 \\ + 962 \\ \hline \end{array}$$

$$\begin{array}{r} 707 \\ + 928 \\ \hline \end{array}$$
$$\begin{array}{r} 964 \\ + 830 \\ \hline \end{array}$$

$$\begin{array}{r} 389 \\ + 958 \\ \hline \end{array}$$
$$\begin{array}{r} 677 \\ + 496 \\ \hline \end{array}$$

$$\begin{array}{r} 436 \\ + 870 \\ \hline \end{array}$$

$$\begin{array}{r} 450 \\ + 719 \\ \hline \end{array}$$

$$\begin{array}{r} 399 \\ + 137 \\ \hline \end{array}$$


$$\begin{array}{r} 743 \\ + 839 \\ \hline \end{array}$$

$$\begin{array}{r} 768 \\ + 812 \\ \hline \end{array}$$

$$\begin{array}{r} 597 \\ + 153 \\ \hline \end{array}$$

How many
chocolate are in the
candy box?

Answer:

Valentine's Day Chocolates Mystery - Sums to 1998 (A)

Instructions: Find out how many chocolates are in the candy box. Any sum over 999 counts as one.

$$\begin{array}{r} 982 \\ + 734 \\ \hline \end{array}$$

Yes 1716

$$\begin{array}{r} 112 \\ + 593 \\ \hline \end{array}$$

No 705

$$\begin{array}{r} 581 \\ + 484 \\ \hline \end{array}$$

Yes 1065

$$\begin{array}{r} 632 \\ + 140 \\ \hline \end{array}$$

No 772

$$\begin{array}{r} 686 \\ + 519 \\ \hline \end{array}$$

Yes 1205

$$\begin{array}{r} 164 \\ + 109 \\ \hline \end{array}$$

No 273

$$\begin{array}{r} 337 \\ + 125 \\ \hline \end{array}$$

No 462

$$\begin{array}{r} 125 \\ + 995 \\ \hline \end{array}$$

Yes 1120

$$\begin{array}{r} 752 \\ + 790 \\ \hline \end{array}$$

Yes 1542

$$\begin{array}{r} 990 \\ + 350 \\ \hline \end{array}$$

Yes 1340

$$\begin{array}{r} 553 \\ + 962 \\ \hline \end{array}$$

Yes 1515

$$\begin{array}{r} 707 \\ + 928 \\ \hline \end{array}$$

Yes 1635

$$\begin{array}{r} 964 \\ + 830 \\ \hline \end{array}$$

Yes 1794

$$\begin{array}{r} 389 \\ + 958 \\ \hline \end{array}$$

Yes 1347

$$\begin{array}{r} 677 \\ + 496 \\ \hline \end{array}$$

Yes 1173

$$\begin{array}{r} 436 \\ + 870 \\ \hline \end{array}$$

Yes 1306

$$\begin{array}{r} 450 \\ + 719 \\ \hline \end{array}$$

Yes 1169

$$\begin{array}{r} 399 \\ + 137 \\ \hline \end{array}$$

No 536

$$\begin{array}{r} 743 \\ + 839 \\ \hline \end{array}$$

Yes 1582

$$\begin{array}{r} 768 \\ + 812 \\ \hline \end{array}$$

Yes 1580

$$\begin{array}{r} 597 \\ + 153 \\ \hline \end{array}$$

No 750

*How many
chocolate are in the
candy box?*

Answer:

15