





# Valentine's Day Chocolates Mystery - Sums to 1998 (C)

Instructions: Find out how many chocolates are in the candy box. Any sum over 999 counts as one.

$$\begin{array}{r} 501 \\ + 383 \\ \hline \end{array}$$

$$\begin{array}{r} 461 \\ + 220 \\ \hline \end{array}$$
$$\begin{array}{r} 100 \\ + 337 \\ \hline \end{array}$$
$$\begin{array}{r} 988 \\ + 846 \\ \hline \end{array}$$

$$\begin{array}{r} 495 \\ + 834 \\ \hline \end{array}$$


$$\begin{array}{r} 771 \\ + 294 \\ \hline \end{array}$$
$$\begin{array}{r} 371 \\ + 697 \\ \hline \end{array}$$
$$\begin{array}{r} 705 \\ + 414 \\ \hline \end{array}$$
$$\begin{array}{r} 752 \\ + 838 \\ \hline \end{array}$$
$$\begin{array}{r} 726 \\ + 180 \\ \hline \end{array}$$

$$\begin{array}{r} 332 \\ + 285 \\ \hline \end{array}$$

$$\begin{array}{r} 187 \\ + 462 \\ \hline \end{array}$$
$$\begin{array}{r} 932 \\ + 589 \\ \hline \end{array}$$

$$\begin{array}{r} 769 \\ + 613 \\ \hline \end{array}$$
$$\begin{array}{r} 551 \\ + 937 \\ \hline \end{array}$$

$$\begin{array}{r} 425 \\ + 165 \\ \hline \end{array}$$

$$\begin{array}{r} 206 \\ + 995 \\ \hline \end{array}$$

$$\begin{array}{r} 988 \\ + 136 \\ \hline \end{array}$$


$$\begin{array}{r} 218 \\ + 751 \\ \hline \end{array}$$


$$\begin{array}{r} 512 \\ + 631 \\ \hline \end{array}$$
$$\begin{array}{r} 365 \\ + 188 \\ \hline \end{array}$$

How many  
chocolate are in the  
candy box?

Answer: