





Valentine's Day Chocolates Mystery - Sums to 1998 (D)

Instructions: Find out how many chocolates are in the candy box. Any sum over 996 counts as one.

$$\begin{array}{r} 217 \\ + 713 \\ \hline \end{array}$$

$$\begin{array}{r} 593 \\ + 999 \\ \hline \end{array}$$
$$\begin{array}{r} 126 \\ + 352 \\ \hline \end{array}$$
$$\begin{array}{r} 850 \\ + 265 \\ \hline \end{array}$$

$$\begin{array}{r} 646 \\ + 816 \\ \hline \end{array}$$

$$\begin{array}{r} 617 \\ + 181 \\ \hline \end{array}$$
$$\begin{array}{r} 346 \\ + 765 \\ \hline \end{array}$$
$$\begin{array}{r} 467 \\ + 518 \\ \hline \end{array}$$
$$\begin{array}{r} 740 \\ + 334 \\ \hline \end{array}$$
$$\begin{array}{r} 476 \\ + 436 \\ \hline \end{array}$$

$$\begin{array}{r} 856 \\ + 263 \\ \hline \end{array}$$

$$\begin{array}{r} 219 \\ + 321 \\ \hline \end{array}$$
$$\begin{array}{r} 674 \\ + 879 \\ \hline \end{array}$$

$$\begin{array}{r} 649 \\ + 527 \\ \hline \end{array}$$
$$\begin{array}{r} 106 \\ + 323 \\ \hline \end{array}$$

$$\begin{array}{r} 214 \\ + 712 \\ \hline \end{array}$$

$$\begin{array}{r} 905 \\ + 490 \\ \hline \end{array}$$

$$\begin{array}{r} 116 \\ + 670 \\ \hline \end{array}$$


$$\begin{array}{r} 746 \\ + 899 \\ \hline \end{array}$$


$$\begin{array}{r} 185 \\ + 399 \\ \hline \end{array}$$
$$\begin{array}{r} 616 \\ + 291 \\ \hline \end{array}$$

How many chocolates are in the candy box?

Answer: