





Valentine's Day Chocolates Mystery - Sums to 1998 (E)

Instructions: Find out how many chocolates are in the candy box. Any sum over 995 counts as one.

$$\begin{array}{r} 659 \\ + 306 \\ \hline \end{array}$$

$$\begin{array}{r} 938 \\ + 598 \\ \hline \end{array}$$
$$\begin{array}{r} 607 \\ + 285 \\ \hline \end{array}$$
$$\begin{array}{r} 357 \\ + 851 \\ \hline \end{array}$$

$$\begin{array}{r} 913 \\ + 501 \\ \hline \end{array}$$

$$\begin{array}{r} 829 \\ + 531 \\ \hline \end{array}$$
$$\begin{array}{r} 846 \\ + 178 \\ \hline \end{array}$$
$$\begin{array}{r} 600 \\ + 208 \\ \hline \end{array}$$
$$\begin{array}{r} 323 \\ + 616 \\ \hline \end{array}$$
$$\begin{array}{r} 453 \\ + 558 \\ \hline \end{array}$$


$$\begin{array}{r} 620 \\ + 975 \\ \hline \end{array}$$
$$\begin{array}{r} 233 \\ + 307 \\ \hline \end{array}$$

$$\begin{array}{r} 791 \\ + 538 \\ \hline \end{array}$$
$$\begin{array}{r} 692 \\ + 315 \\ \hline \end{array}$$
$$\begin{array}{r} 558 \\ + 238 \\ \hline \end{array}$$

$$\begin{array}{r} 636 \\ + 405 \\ \hline \end{array}$$

$$\begin{array}{r} 626 \\ + 868 \\ \hline \end{array}$$

$$\begin{array}{r} 160 \\ + 465 \\ \hline \end{array}$$


$$\begin{array}{r} 486 \\ + 719 \\ \hline \end{array}$$


$$\begin{array}{r} 427 \\ + 911 \\ \hline \end{array}$$
$$\begin{array}{r} 721 \\ + 548 \\ \hline \end{array}$$

How many
chocolate are in the
candy box?

Answer:

Valentine's Day Chocolates Mystery - Sums to 1998 (E)

Instructions: Find out how many chocolates are in the candy box. Any sum over 995 counts as one.

$$\begin{array}{r} 659 \\ + 306 \\ \hline \end{array}$$

No 965

$$\begin{array}{r} 938 \\ + 598 \\ \hline \end{array}$$

Yes 1536

$$\begin{array}{r} 607 \\ + 285 \\ \hline \end{array}$$

No 892

$$\begin{array}{r} 357 \\ + 851 \\ \hline \end{array}$$

Yes 1208

$$\begin{array}{r} 913 \\ + 501 \\ \hline \end{array}$$

Yes 1414

$$\begin{array}{r} 829 \\ + 531 \\ \hline \end{array}$$

Yes 1360

$$\begin{array}{r} 846 \\ + 178 \\ \hline \end{array}$$

Yes 1024

$$\begin{array}{r} 600 \\ + 208 \\ \hline \end{array}$$

No 808

$$\begin{array}{r} 323 \\ + 616 \\ \hline \end{array}$$

No 939

$$\begin{array}{r} 453 \\ + 558 \\ \hline \end{array}$$

Yes 1011

$$\begin{array}{r} 620 \\ + 975 \\ \hline \end{array}$$

Yes 1595

$$\begin{array}{r} 233 \\ + 307 \\ \hline \end{array}$$

No 540

$$\begin{array}{r} 791 \\ + 538 \\ \hline \end{array}$$

Yes 1329

$$\begin{array}{r} 692 \\ + 315 \\ \hline \end{array}$$

Yes 1007

$$\begin{array}{r} 558 \\ + 238 \\ \hline \end{array}$$

No 796

$$\begin{array}{r} 636 \\ + 405 \\ \hline \end{array}$$

Yes 1041

$$\begin{array}{r} 626 \\ + 868 \\ \hline \end{array}$$

Yes 1494

$$\begin{array}{r} 160 \\ + 465 \\ \hline \end{array}$$

No 625

$$\begin{array}{r} 486 \\ + 719 \\ \hline \end{array}$$

Yes 1205

$$\begin{array}{r} 427 \\ + 911 \\ \hline \end{array}$$

Yes 1338

$$\begin{array}{r} 721 \\ + 548 \\ \hline \end{array}$$

Yes 1269

*How many
chocolate are in the
candy box?*

Answer:

14