

# Sweet Hearts Addition (A)

What is the value of each Sweet Heart?

$$53 + \text{G} = 73 \qquad \text{M} + 80 = 114$$

$$25 + \text{C} = 37 \qquad \text{O} + 27 = 63$$

$$12 + \text{E} = 103 \qquad \text{S} + 37 = 98$$

$$53 + \text{B} = 117 \qquad \text{N} + 63 = 85$$

$$48 + \text{D} = 141 \qquad \text{P} + 93 = 122$$

$$95 + \text{I} = 130 \qquad \text{R} + 36 = 73$$

$$86 + \text{H} = 154 \qquad \text{K} + 15 = 38$$

$$60 + \text{A} = 89 \qquad \text{L} + 94 = 144$$

$$98 + \text{J} = 134 \qquad \text{Q} + 36 = 112$$

$$73 + \text{F} = 99 \qquad \text{T} + 43 = 75$$

Happy Valentine's Day from Math-Drills.Com

# Sweet Hearts Addition (A) Answers

What is the value of each Sweet Heart?

$53 + 20 = 73$

$34 + 80 = 114$

$25 + 12 = 37$

$36 + 27 = 63$

$12 + 91 = 103$

$61 + 37 = 98$

$53 + 64 = 117$

$22 + 63 = 85$

$48 + 93 = 141$

$29 + 93 = 122$

$95 + 35 = 130$

$37 + 36 = 73$

$86 + 68 = 154$

$23 + 15 = 38$

$60 + 29 = 89$

$50 + 94 = 144$

$98 + 36 = 134$

$76 + 36 = 112$





















$73 + 26 = 99$

$32 + 43 = 75$

Happy Valentine's Day from Math-Drills.Com

# Sweet Hearts Addition (B)

What is the value of each Sweet Heart?

34	+		=	44			+	43	=	111
18	+		=	93			+	86	=	102
17	+		=	29			+	73	=	139
26	+		=	117			+	70	=	119
80	+		=	159			+	68	=	107
81	+		=	168			+	70	=	97
93	+		=	105			+	68	=	145
85	+		=	154			+	20	=	101
44	+		=	76			+	40	=	86
40	+		=	107			+	31	=	85

Happy Valentine's Day from Math-Drills.Com

# Sweet Hearts Addition (B) Answers

What is the value of each Sweet Heart?

$34 + 10 = 44$

$68 + 43 = 111$

$18 + 75 = 93$

$16 + 86 = 102$

$17 + 12 = 29$

$66 + 73 = 139$

$26 + 91 = 117$

$49 + 70 = 119$

$80 + 79 = 159$

$39 + 68 = 107$

$81 + 87 = 168$

$27 + 70 = 97$

$93 + 12 = 105$

$77 + 68 = 145$

$85 + 69 = 154$

$81 + 20 = 101$

$44 + 32 = 76$

$46 + 40 = 86$





















$40 + 67 = 107$

$54 + 31 = 85$

Happy Valentine's Day from Math-Drills.Com

# Sweet Hearts Addition (C)

What is the value of each Sweet Heart?

14	+		=	68		+	88	=	156
31	+		=	69		+	54	=	108
90	+		=	114		+	87	=	143
39	+		=	85		+	67	=	110
92	+		=	174		+	43	=	113
17	+		=	94		+	66	=	151
77	+		=	100		+	53	=	82
15	+		=	66		+	21	=	86
50	+		=	141		+	34	=	90
81	+		=	119		+	32	=	42

Happy Valentine's Day from Math-Drills.Com

# Sweet Hearts Addition (C) Answers

What is the value of each Sweet Heart?

$14 + 54 = 68$

$68 + 88 = 156$

$31 + 38 = 69$

$54 + 54 = 108$

$90 + 24 = 114$

$56 + 87 = 143$

$39 + 46 = 85$

$43 + 67 = 110$

$92 + 82 = 174$

$70 + 43 = 113$

$17 + 77 = 94$

$85 + 66 = 151$

$77 + 23 = 100$

$29 + 53 = 82$

$15 + 51 = 66$

$65 + 21 = 86$

$50 + 91 = 141$

$56 + 34 = 90$

$81 + 38 = 119$

$10 + 32 = 42$

Happy Valentine's Day from Math-Drills.Com

# Sweet Hearts Addition (D)

What is the value of each Sweet Heart?

$42 + \text{A} = 109$

$\text{R} + 20 = 89$

$37 + \text{C} = 115$

$\text{Q} + 68 = 98$

$62 + \text{B} = 100$

$\text{P} + 85 = 143$

$68 + \text{I} = 126$

$\text{S} + 59 = 128$

$36 + \text{G} = 56$

$\text{N} + 37 = 119$

$22 + \text{H} = 65$

$\text{M} + 79 = 118$

$67 + \text{F} = 96$

$\text{T} + 65 = 82$

$30 + \text{E} = 94$

$\text{O} + 15 = 93$

$26 + \text{D} = 108$

$\text{K} + 77 = 155$

$33 + \text{J} = 100$

$\text{L} + 42 = 132$

Happy Valentine's Day from Math-Drills.Com

# Sweet Hearts Addition (D) Answers

What is the value of each Sweet Heart?

$42 + 67 = 109$

$69 + 20 = 89$

$37 + 78 = 115$

$30 + 68 = 98$

$62 + 38 = 100$

$58 + 85 = 143$

$68 + 58 = 126$

$69 + 59 = 128$

$36 + 20 = 56$

$82 + 37 = 119$

$22 + 43 = 65$

$39 + 79 = 118$

$67 + 29 = 96$

$17 + 65 = 82$

$30 + 64 = 94$

$78 + 15 = 93$

$26 + 82 = 108$

$78 + 77 = 155$

$33 + 67 = 100$

$90 + 42 = 132$

Happy Valentine's Day from Math-Drills.Com



# Sweet Hearts Addition (E)

What is the value of each Sweet Heart?

$58 + \text{G} = 102$

$\text{S} + 76 = 87$

$39 + \text{H} = 81$

$\text{K} + 27 = 91$

$38 + \text{A} = 134$

$\text{P} + 56 = 129$

$43 + \text{C} = 111$

$\text{T} + 69 = 159$

$58 + \text{I} = 135$

$\text{M} + 89 = 102$

$12 + \text{F} = 27$

$\text{O} + 29 = 64$

$58 + \text{B} = 88$

$\text{R} + 50 = 112$

$32 + \text{J} = 112$

$\text{L} + 75 = 133$

$16 + \text{D} = 101$

$\text{N} + 92 = 119$

$66 + \text{E} = 163$

$\text{Q} + 82 = 131$

Happy Valentine's Day from Math-Drills.Com

# Sweet Hearts Addition (E) Answers

What is the value of each Sweet Heart?

$58 + 44 = 102$

$11 + 76 = 87$

$39 + 42 = 81$

$64 + 27 = 91$

$38 + 96 = 134$

$73 + 56 = 129$

$43 + 68 = 111$

$90 + 69 = 159$

$58 + 77 = 135$

$13 + 89 = 102$

$12 + 15 = 27$

$35 + 29 = 64$

$58 + 30 = 88$

$62 + 50 = 112$

$32 + 80 = 112$

$58 + 75 = 133$

$16 + 85 = 101$

$27 + 92 = 119$

$66 + 97 = 163$

$49 + 82 = 131$

Happy Valentine's Day from Math-Drills.Com

# Sweet Hearts Addition (F)

What is the value of each Sweet Heart?

$$12 + \text{I} = 42 \qquad \text{R} + 94 = 114$$

$$20 + \text{D} = 108 \qquad \text{S} + 95 = 172$$

$$21 + \text{J} = 34 \qquad \text{L} + 60 = 153$$

$$92 + \text{H} = 182 \qquad \text{K} + 45 = 137$$

$$13 + \text{F} = 64 \qquad \text{N} + 21 = 91$$

$$50 + \text{E} = 122 \qquad \text{T} + 23 = 79$$

$$91 + \text{B} = 184 \qquad \text{P} + 37 = 128$$

$$73 + \text{C} = 152 \qquad \text{O} + 38 = 129$$

$$12 + \text{G} = 80 \qquad \text{Q} + 14 = 61$$

$$84 + \text{A} = 152 \qquad \text{M} + 32 = 87$$

Happy Valentine's Day from Math-Drills.Com

# Sweet Hearts Addition (F) Answers

What is the value of each Sweet Heart?

$12 + 30 = 42$

$20 + 94 = 114$

$20 + 88 = 108$

$77 + 95 = 172$

$21 + 13 = 34$

$93 + 60 = 153$

$92 + 90 = 182$

$92 + 45 = 137$

$13 + 51 = 64$

$70 + 21 = 91$

$50 + 72 = 122$

$56 + 23 = 79$

$91 + 93 = 184$

$91 + 37 = 128$

$73 + 79 = 152$

$91 + 38 = 129$

$12 + 68 = 80$

$47 + 14 = 61$

$84 + 68 = 152$

$55 + 32 = 87$

Happy Valentine's Day from Math-Drills.Com

# Sweet Hearts Addition (9)

What is the value of each Sweet Heart?

$59 + \text{F} = 115$

$\text{T} + 36 = 49$

$98 + \text{I} = 152$

$\text{P} + 92 = 191$

$12 + \text{C} = 109$

$\text{S} + 14 = 108$

$21 + \text{E} = 59$

$\text{R} + 77 = 131$

$85 + \text{J} = 174$

$\text{N} + 76 = 87$

$99 + \text{A} = 192$

$\text{Q} + 56 = 153$

$51 + \text{B} = 116$

$\text{L} + 69 = 85$

$42 + \text{G} = 105$

$\text{M} + 98 = 190$

$73 + \text{H} = 136$

$\text{K} + 80 = 98$

$92 + \text{D} = 108$

$\text{O} + 47 = 122$

Happy Valentine's Day from Math-Drills.Com

# Sweet Hearts Addition (9) Answers

What is the value of each Sweet Heart?

$59 + 56 = 115$

$13 + 36 = 49$

$98 + 54 = 152$

$99 + 92 = 191$

$12 + 97 = 109$

$94 + 14 = 108$

$21 + 38 = 59$

$54 + 77 = 131$

$85 + 89 = 174$

$11 + 76 = 87$

$99 + 93 = 192$

$97 + 56 = 153$

$51 + 65 = 116$

$16 + 69 = 85$

$42 + 63 = 105$

$92 + 98 = 190$

$73 + 63 = 136$

$18 + 80 = 98$

$92 + 16 = 108$

$75 + 47 = 122$

Happy Valentine's Day from Math-Drills.Com

# Sweet Hearts Addition (H)

What is the value of each Sweet Heart?

$44 + \text{I} = 97$

$\text{S} + 29 = 53$

$11 + \text{H} = 36$

$\text{K} + 96 = 127$

$42 + \text{D} = 75$

$\text{L} + 30 = 115$

$45 + \text{A} = 57$

$\text{P} + 54 = 142$

$76 + \text{C} = 123$

$\text{N} + 88 = 146$

$63 + \text{G} = 125$

$\text{T} + 29 = 61$

$56 + \text{B} = 153$

$\text{R} + 11 = 75$

$40 + \text{F} = 78$

$\text{O} + 11 = 69$

$13 + \text{J} = 87$

$\text{Q} + 65 = 108$

$31 + \text{E} = 73$

$\text{M} + 62 = 141$

Happy Valentine's Day from Math-Drills.Com

# Sweet Hearts Addition (H) Answers

What is the value of each Sweet Heart?

$44 + 53 = 97$

$24 + 29 = 53$

$11 + 25 = 36$

$31 + 96 = 127$

$42 + 33 = 75$

$85 + 30 = 115$

$45 + 12 = 57$

$88 + 54 = 142$

$76 + 47 = 123$

$58 + 88 = 146$

$63 + 62 = 125$

$32 + 29 = 61$

$56 + 97 = 153$

$64 + 11 = 75$

$40 + 38 = 78$

$58 + 11 = 69$

$13 + 74 = 87$

$43 + 65 = 108$

$31 + 42 = 73$

$79 + 62 = 141$

Happy Valentine's Day from Math-Drills.Com



# Sweet Hearts Addition (1)

What is the value of each Sweet Heart?

$18 + \text{B} = 82$

$\text{K} + 36 = 90$

$24 + \text{D} = 108$

$\text{N} + 66 = 104$

$62 + \text{I} = 104$

$\text{S} + 62 = 156$

$50 + \text{C} = 142$

$\text{L} + 49 = 118$

$16 + \text{E} = 47$

$\text{O} + 74 = 90$

$98 + \text{F} = 126$

$\text{M} + 72 = 169$

$96 + \text{A} = 185$

$\text{Q} + 76 = 145$

$32 + \text{G} = 119$

$\text{P} + 72 = 157$

$77 + \text{H} = 95$

$\text{R} + 32 = 42$

$92 + \text{J} = 186$

$\text{T} + 61 = 133$

Happy Valentine's Day from Math-Drills.Com

# Sweet Hearts Addition (1) Answers

What is the value of each Sweet Heart?

$18 + 64 = 82$

$54 + 36 = 90$

$24 + 84 = 108$

$38 + 66 = 104$

$62 + 42 = 104$

$94 + 62 = 156$

$50 + 92 = 142$

$69 + 49 = 118$

$16 + 31 = 47$

$16 + 74 = 90$

$98 + 28 = 126$

$97 + 72 = 169$

$96 + 89 = 185$

$69 + 76 = 145$

$32 + 87 = 119$

$85 + 72 = 157$

$77 + 18 = 95$

$10 + 32 = 42$

$92 + 94 = 186$

$72 + 61 = 133$

Happy Valentine's Day from Math-Drills.Com

# Sweet Hearts Addition (J)

What is the value of each Sweet Heart?

$$41 + \text{I} = 53 \qquad \text{R} + 78 = 167$$

$$68 + \text{A} = 124 \qquad \text{K} + 36 = 72$$

$$90 + \text{F} = 123 \qquad \text{P} + 32 = 121$$

$$81 + \text{H} = 156 \qquad \text{N} + 43 = 96$$

$$96 + \text{D} = 193 \qquad \text{M} + 28 = 113$$

$$33 + \text{J} = 74 \qquad \text{S} + 82 = 97$$

$$73 + \text{B} = 107 \qquad \text{Q} + 70 = 128$$

$$63 + \text{C} = 157 \qquad \text{T} + 89 = 180$$

$$24 + \text{G} = 64 \qquad \text{L} + 29 = 90$$

$$38 + \text{E} = 68 \qquad \text{O} + 60 = 79$$

Happy Valentine's Day from Math-Drills.Com

# Sweet Hearts Addition (J) Answers

What is the value of each Sweet Heart?

$41 + 12 = 53$

$89 + 78 = 167$

$68 + 56 = 124$

$36 + 36 = 72$

$90 + 33 = 123$

$89 + 32 = 121$

$81 + 75 = 156$

$53 + 43 = 96$

$96 + 97 = 193$

$85 + 28 = 113$

$33 + 41 = 74$

$15 + 82 = 97$

$73 + 34 = 107$

$58 + 70 = 128$

$63 + 94 = 157$

$91 + 89 = 180$

$24 + 40 = 64$

$61 + 29 = 90$

$38 + 30 = 68$

$19 + 60 = 79$

Happy Valentine's Day from Math-Drills.Com