


# Counting Candy Hearts (A)

Name: \_\_\_\_\_

Date: \_\_\_\_\_

Count how many candy hearts there are in each group.


1. There are \_\_\_\_\_ orange hearts in the group below.



2. There are \_\_\_\_\_ green hearts in the group below.



3. There are \_\_\_\_\_ blue hearts in the group below.



4. There are \_\_\_\_\_ pink hearts in the group below.




# Counting Candy Hearts (A) Answers

Name: \_\_\_\_\_

Date: \_\_\_\_\_

Count how many candy hearts there are in each group.


1. There are 4 orange hearts in the group below.



2. There are 5 green hearts in the group below.



3. There are 9 blue hearts in the group below.



4. There are 3 pink hearts in the group below.

