

Counting Candy Hearts (C)

Name: _____


Date: _____

Count how many candy hearts there are in each group.


1. There are _____ blue hearts in the group below.



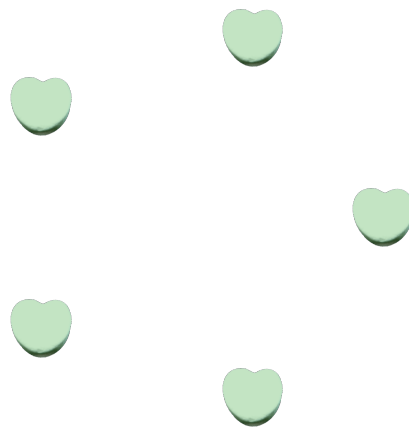
2. There are _____ pink hearts in the group below.



3. There are _____ orange hearts in the group below.



4. There are _____ green hearts in the group below.



Counting Candy Hearts (C) Answers

Name: _____


Date: _____

Count how many candy hearts there are in each group.


1. There are 3 blue hearts in the group below.



2. There are 12 pink hearts in the group below.



3. There are 9 orange hearts in the group below.



4. There are 5 green hearts in the group below.

