


Counting Candy Hearts (D)

Name: _____


Date: _____

Count how many candy hearts there are in each group.


1. There are _____ pink hearts in the group below.




2. There are _____ blue hearts in the group below.



3. There are _____ orange hearts in the group below.



4. There are _____ green hearts in the group below.




Counting Candy Hearts (D) Answers

Name: _____


Date: _____

Count how many candy hearts there are in each group.


1. There are 18 pink hearts in the group below.



2. There are 8 blue hearts in the group below.



3. There are 11 orange hearts in the group below.



4. There are 37 green hearts in the group below.

