


Counting Candy Hearts (E)

Name: _____

Date: _____

Count how many candy hearts there are in each group.

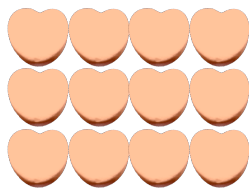
1. There are _____ blue hearts in the group below.




2. There are _____ green hearts in the group below.



3. There are _____ orange hearts in the group below.



4. There are _____ pink hearts in the group below.



Counting Candy Hearts (E) Answers

Name: _____


Date: _____

Count how many candy hearts there are in each group.

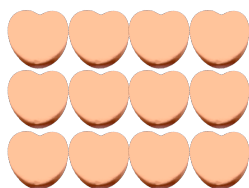
1. There are 4 blue hearts in the group below.



2. There are 12 green hearts in the group below.



3. There are 12 orange hearts in the group below.



4. There are 25 pink hearts in the group below.

