

# Counting Candy Hearts (G)

Name: \_\_\_\_\_


Date: \_\_\_\_\_

Count how many candy hearts there are in each group.

1. There are \_\_\_\_\_ green hearts in the group below.




2. There are \_\_\_\_\_ pink hearts in the group below.



3. There are \_\_\_\_\_ orange hearts in the group below.



4. There are \_\_\_\_\_ blue hearts in the group below.



# Counting Candy Hearts (G) Answers

Name: \_\_\_\_\_


Date: \_\_\_\_\_

Count how many candy hearts there are in each group.

1. There are 6 green hearts in the group below.



2. There are 12 pink hearts in the group below.



3. There are 8 orange hearts in the group below.



4. There are 25 blue hearts in the group below.

