


Counting Candy Hearts (C)

Name: _____


Date: _____

Count how many candy hearts there are in each group.


1. There are _____ pink hearts in the group below.




2. There are _____ orange hearts in the group below.



3. There are _____ green hearts in the group below.



4. There are _____ blue hearts in the group below.




Counting Candy Hearts (C) Answers

Name: _____


Date: _____

Count how many candy hearts there are in each group.


1. There are 30 pink hearts in the group below.



2. There are 49 orange hearts in the group below.



3. There are 24 green hearts in the group below.



4. There are 72 blue hearts in the group below.

