

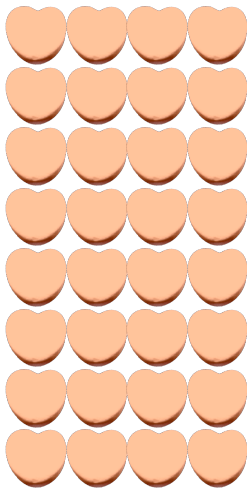
# Counting Candy Hearts (9)

Name: \_\_\_\_\_


Date: \_\_\_\_\_

Count how many candy hearts there are in each group.


1. There are \_\_\_\_\_ orange hearts in the group below.



2. There are \_\_\_\_\_ green hearts in the group below.



3. There are \_\_\_\_\_ blue hearts in the group below.



4. There are \_\_\_\_\_ pink hearts in the group below.



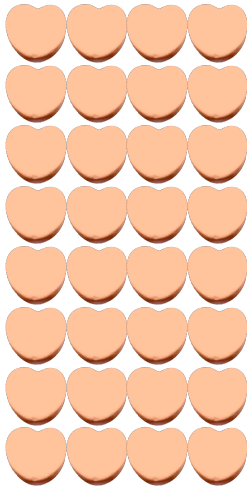
# Counting Candy Hearts (9) Answers

Name: \_\_\_\_\_


Date: \_\_\_\_\_

Count how many candy hearts there are in each group.


1. There are 32 orange hearts in the group below.



2. There are 63 green hearts in the group below.



3. There are 18 blue hearts in the group below.



4. There are 10 pink hearts in the group below.

