


Counting Candy Hearts (9)

Name: _____


Date: _____

Count how many candy hearts there are in each group.


1. There are _____ blue hearts in the group below.



2. There are _____ orange hearts in the group below.



3. There are _____ green hearts in the group below.



4. There are _____ pink hearts in the group below.

