

# Counting Candy Hearts (9)

Name: \_\_\_\_\_


Date: \_\_\_\_\_

Count how many candy hearts there are in each group.

1. There are \_\_\_\_\_ green hearts in the group below.



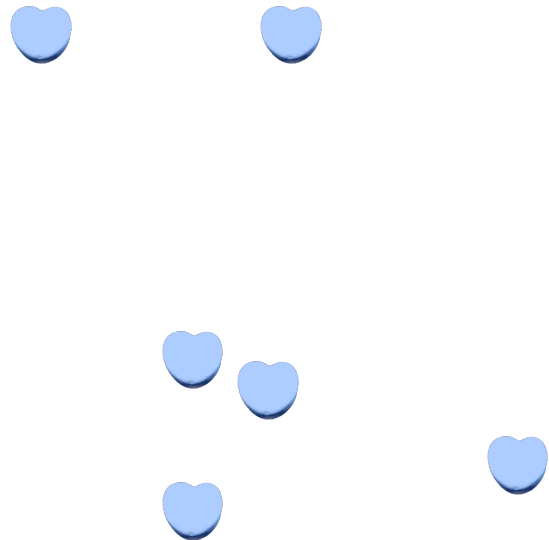
2. There are \_\_\_\_\_ pink hearts in the group below.



3. There are \_\_\_\_\_ orange hearts in the group below.



4. There are \_\_\_\_\_ blue hearts in the group below.



# Counting Candy Hearts (9) Answers

Name: \_\_\_\_\_


Date: \_\_\_\_\_

Count how many candy hearts there are in each group.

1. There are 8 green hearts in the group below.



2. There are 7 pink hearts in the group below.



3. There are 10 orange hearts in the group below.



4. There are 6 blue hearts in the group below.

