


# Counting Candy Hearts (A)

Name: \_\_\_\_\_


Date: \_\_\_\_\_

Count how many candy hearts there are in each group.


1. There are \_\_\_\_\_ green hearts in the group below.




2. There are \_\_\_\_\_ blue hearts in the group below.



3. There are \_\_\_\_\_ pink hearts in the group below.



4. There are \_\_\_\_\_ orange hearts in the group below.




# Counting Candy Hearts (A) Answers

Name: \_\_\_\_\_

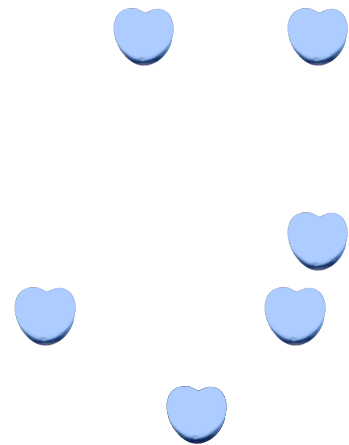
Date: \_\_\_\_\_

Count how many candy hearts there are in each group.


1. There are 4 green hearts in the group below.



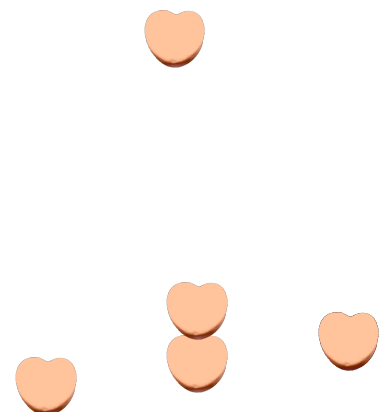
2. There are 7 blue hearts in the group below.



3. There are 4 pink hearts in the group below.



4. There are 5 orange hearts in the group below.




# Counting Candy Hearts (B)

Name: \_\_\_\_\_


Date: \_\_\_\_\_

Count how many candy hearts there are in each group.


1. There are \_\_\_\_\_ pink hearts in the group below.



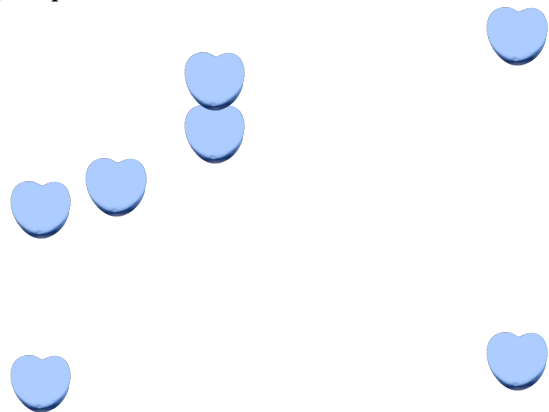
2. There are \_\_\_\_\_ orange hearts in the group below.



3. There are \_\_\_\_\_ green hearts in the group below.



4. There are \_\_\_\_\_ blue hearts in the group below.




# Counting Candy Hearts (B) Answers

Name: \_\_\_\_\_


Date: \_\_\_\_\_

Count how many candy hearts there are in each group.


1. There are 8 pink hearts in the group below.



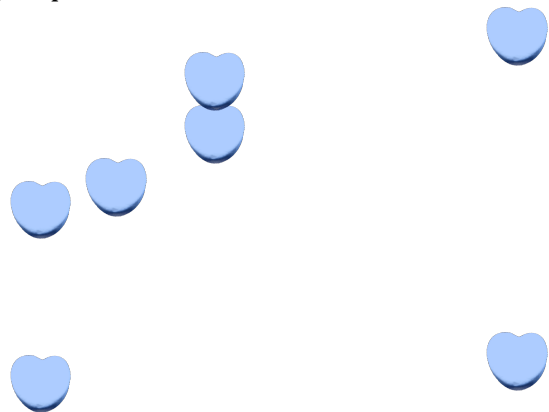
2. There are 6 orange hearts in the group below.



3. There are 4 green hearts in the group below.



4. There are 7 blue hearts in the group below.




# Counting Candy Hearts (C)

Name: \_\_\_\_\_


Date: \_\_\_\_\_

Count how many candy hearts there are in each group.


1. There are \_\_\_\_\_ orange hearts in the group below.




2. There are \_\_\_\_\_ blue hearts in the group below.



3. There are \_\_\_\_\_ green hearts in the group below.



4. There are \_\_\_\_\_ pink hearts in the group below.




# Counting Candy Hearts (C) Answers

Name: \_\_\_\_\_


Date: \_\_\_\_\_

Count how many candy hearts there are in each group.


1. There are 4 orange hearts in the group below.




2. There are 2 blue hearts in the group below.



3. There are 10 green hearts in the group below.



4. There are 8 pink hearts in the group below.




# Counting Candy Hearts (D)

Name: \_\_\_\_\_


Date: \_\_\_\_\_

Count how many candy hearts there are in each group.


1. There are \_\_\_\_\_ green hearts in the group below.




2. There are \_\_\_\_\_ pink hearts in the group below.



3. There are \_\_\_\_\_ orange hearts in the group below.



4. There are \_\_\_\_\_ blue hearts in the group below.




# Counting Candy Hearts (D) Answers

Name: \_\_\_\_\_


Date: \_\_\_\_\_

Count how many candy hearts there are in each group.


1. There are 7 green hearts in the group below.




2. There are 6 pink hearts in the group below.



3. There are 7 orange hearts in the group below.



4. There are 6 blue hearts in the group below.






# Counting Candy Hearts (E)

Name: \_\_\_\_\_


Date: \_\_\_\_\_

Count how many candy hearts there are in each group.


1. There are \_\_\_\_\_ blue hearts in the group below.




2. There are \_\_\_\_\_ pink hearts in the group below.



3. There are \_\_\_\_\_ orange hearts in the group below.



4. There are \_\_\_\_\_ green hearts in the group below.




# Counting Candy Hearts (E) Answers

Name: \_\_\_\_\_


Date: \_\_\_\_\_

Count how many candy hearts there are in each group.


1. There are 8 blue hearts in the group below.




2. There are 10 pink hearts in the group below.



3. There are 9 orange hearts in the group below.



4. There are 4 green hearts in the group below.




# Counting Candy Hearts (F)

Name: \_\_\_\_\_


Date: \_\_\_\_\_

Count how many candy hearts there are in each group.


1. There are \_\_\_\_\_ pink hearts in the group below.




2. There are \_\_\_\_\_ blue hearts in the group below.



3. There are \_\_\_\_\_ orange hearts in the group below.



4. There are \_\_\_\_\_ green hearts in the group below.




# Counting Candy Hearts (F) Answers

Name: \_\_\_\_\_


Date: \_\_\_\_\_

Count how many candy hearts there are in each group.


1. There are 9 pink hearts in the group below.




2. There are 3 blue hearts in the group below.



3. There are 5 orange hearts in the group below.



4. There are 10 green hearts in the group below.




# Counting Candy Hearts (G)

Name: \_\_\_\_\_

Date: \_\_\_\_\_

Count how many candy hearts there are in each group.


1. There are \_\_\_\_\_ blue hearts in the group below.




2. There are \_\_\_\_\_ green hearts in the group below.



3. There are \_\_\_\_\_ pink hearts in the group below.



4. There are \_\_\_\_\_ orange hearts in the group below.




# Counting Candy Hearts (G) Answers

Name: \_\_\_\_\_

Date: \_\_\_\_\_

Count how many candy hearts there are in each group.


1. There are 4 blue hearts in the group below.




2. There are 6 green hearts in the group below.



3. There are 6 pink hearts in the group below.



4. There are 10 orange hearts in the group below.




# Counting Candy Hearts (7)

Name: \_\_\_\_\_


Date: \_\_\_\_\_

Count how many candy hearts there are in each group.


1. There are \_\_\_\_\_ green hearts in the group below.




2. There are \_\_\_\_\_ blue hearts in the group below.



3. There are \_\_\_\_\_ pink hearts in the group below.



4. There are \_\_\_\_\_ orange hearts in the group below.




# Counting Candy Hearts (7) Answers

Name: \_\_\_\_\_


Date: \_\_\_\_\_

Count how many candy hearts there are in each group.


1. There are 8 green hearts in the group below.




2. There are 8 blue hearts in the group below.



3. There are 8 pink hearts in the group below.



4. There are 8 orange hearts in the group below.





# Counting Candy Hearts (9)

Name: \_\_\_\_\_


Date: \_\_\_\_\_

Count how many candy hearts there are in each group.

1. There are \_\_\_\_\_ green hearts in the group below.



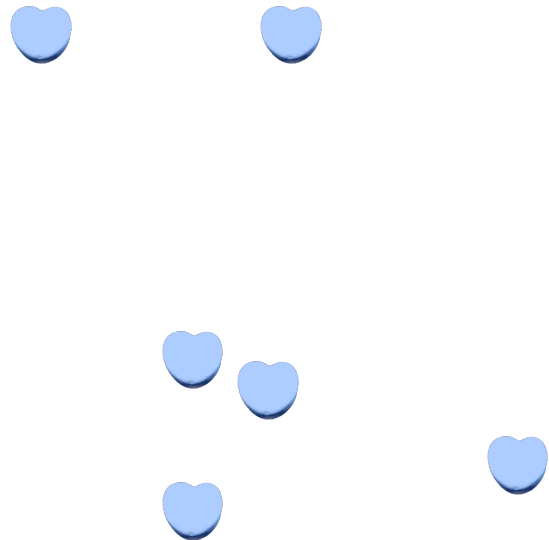
2. There are \_\_\_\_\_ pink hearts in the group below.



3. There are \_\_\_\_\_ orange hearts in the group below.



4. There are \_\_\_\_\_ blue hearts in the group below.



# Counting Candy Hearts (9) Answers

Name: \_\_\_\_\_


Date: \_\_\_\_\_

Count how many candy hearts there are in each group.

1. There are 8 green hearts in the group below.



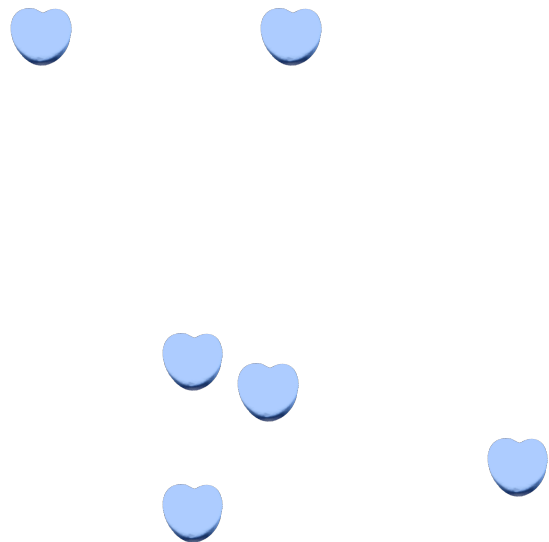
2. There are 7 pink hearts in the group below.



3. There are 10 orange hearts in the group below.



4. There are 6 blue hearts in the group below.



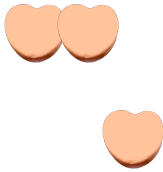
# Counting Candy Hearts (9)

Name: \_\_\_\_\_


Date: \_\_\_\_\_

Count how many candy hearts there are in each group.


1. There are \_\_\_\_\_ orange hearts in the group below.




2. There are \_\_\_\_\_ pink hearts in the group below.



3. There are \_\_\_\_\_ green hearts in the group below.



4. There are \_\_\_\_\_ blue hearts in the group below.



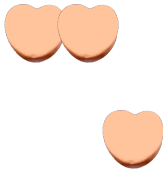
# Counting Candy Hearts (9) Answers

Name: \_\_\_\_\_


Date: \_\_\_\_\_

Count how many candy hearts there are in each group.


1. There are 3 orange hearts in the group below.



2. There are 5 pink hearts in the group below.



3. There are 9 green hearts in the group below.



4. There are 9 blue hearts in the group below.

