

Counting Candy Hearts (A)

Name: _____

Date: _____

Count how many candy hearts there are in each group.


1. There are _____ green hearts in the group below.




2. There are _____ orange hearts in the group below.



3. There are _____ pink hearts in the group below.



4. There are _____ blue hearts in the group below.



Counting Candy Hearts (A) Answers

Name: _____

Date: _____

Count how many candy hearts there are in each group.

1. There are 45 green hearts in the group below.




2. There are 31 orange hearts in the group below.



3. There are 42 pink hearts in the group below.



4. There are 38 blue hearts in the group below.



Counting Candy Hearts (B)

Name: _____

Date: _____

Count how many candy hearts there are in each group.


1. There are _____ orange hearts in the group below.




2. There are _____ green hearts in the group below.



3. There are _____ pink hearts in the group below.



4. There are _____ blue hearts in the group below.



Counting Candy Hearts (B) Answers

Name: _____

Date: _____

Count how many candy hearts there are in each group.


1. There are 43 orange hearts in the group below.




2. There are 22 green hearts in the group below.



3. There are 23 pink hearts in the group below.



4. There are 23 blue hearts in the group below.



Counting Candy Hearts (C)

Name: _____

Date: _____

Count how many candy hearts there are in each group.


1. There are _____ blue hearts in the group below.



2. There are _____ pink hearts in the group below.



3. There are _____ green hearts in the group below.



4. There are _____ orange hearts in the group below.




Counting Candy Hearts (C) Answers

Name: _____

Date: _____

Count how many candy hearts there are in each group.

1. There are 33 blue hearts in the group below.



2. There are 41 pink hearts in the group below.



3. There are 35 green hearts in the group below.



4. There are 38 orange hearts in the group below.



Counting Candy Hearts (D)

Name: _____


Date: _____

Count how many candy hearts there are in each group.

1. There are _____ pink hearts in the group below.



2. There are _____ blue hearts in the group below.



3. There are _____ green hearts in the group below.



4. There are _____ orange hearts in the group below.



Counting Candy Hearts (D) Answers

Name: _____


Date: _____

Count how many candy hearts there are in each group.

1. There are 24 pink hearts in the group below.



2. There are 44 blue hearts in the group below.



3. There are 29 green hearts in the group below.



4. There are 34 orange hearts in the group below.




Counting Candy Hearts (E)

Name: _____

Date: _____

Count how many candy hearts there are in each group.

1. There are _____ pink hearts in the group below.



2. There are _____ orange hearts in the group below.



3. There are _____ green hearts in the group below.



4. There are _____ blue hearts in the group below.



Counting Candy Hearts (E) Answers

Name: _____

Date: _____

Count how many candy hearts there are in each group.

1. There are 43 pink hearts in the group below.



2. There are 43 orange hearts in the group below.



3. There are 21 green hearts in the group below.



4. There are 45 blue hearts in the group below.




Counting Candy Hearts (F)

Name: _____

Date: _____

Count how many candy hearts there are in each group.

1. There are _____ blue hearts in the group below.




2. There are _____ pink hearts in the group below.



3. There are _____ orange hearts in the group below.



4. There are _____ green hearts in the group below.




Counting Candy Hearts (F) Answers

Name: _____

Date: _____

Count how many candy hearts there are in each group.

1. There are 31 blue hearts in the group below.



2. There are 49 pink hearts in the group below.



3. There are 27 orange hearts in the group below.



4. There are 29 green hearts in the group below.




Counting Candy Hearts (G)

Name: _____

Date: _____

Count how many candy hearts there are in each group.


1. There are _____ green hearts in the group below.




2. There are _____ orange hearts in the group below.



3. There are _____ blue hearts in the group below.



4. There are _____ pink hearts in the group below.




Counting Candy Hearts (G) Answers

Name: _____

Date: _____

Count how many candy hearts there are in each group.


1. There are 25 green hearts in the group below.




2. There are 25 orange hearts in the group below.



3. There are 34 blue hearts in the group below.



4. There are 26 pink hearts in the group below.



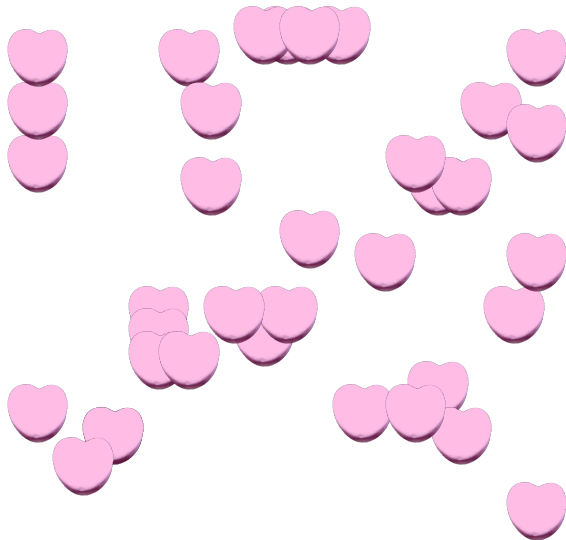
Counting Candy Hearts (7)

Name: _____

Date: _____

Count how many candy hearts there are in each group.


1. There are _____ pink hearts in the group below.



2. There are _____ green hearts in the group below.



3. There are _____ blue hearts in the group below.



4. There are _____ orange hearts in the group below.



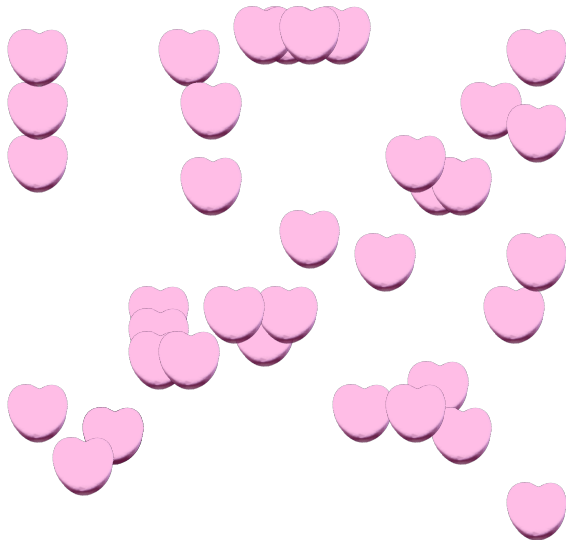
Counting Candy Hearts (7) Answers

Name: _____

Date: _____

Count how many candy hearts there are in each group.


1. There are 35 pink hearts in the group below.



2. There are 29 green hearts in the group below.



3. There are 27 blue hearts in the group below.



4. There are 28 orange hearts in the group below.




Counting Candy Hearts (9)

Name: _____

Date: _____

Count how many candy hearts there are in each group.

1. There are _____ green hearts in the group below.




2. There are _____ orange hearts in the group below.



3. There are _____ pink hearts in the group below.



4. There are _____ blue hearts in the group below.




Counting Candy Hearts (9) Answers

Name: _____

Date: _____

Count how many candy hearts there are in each group.

1. There are 33 green hearts in the group below.




2. There are 22 orange hearts in the group below.



3. There are 30 pink hearts in the group below.



4. There are 32 blue hearts in the group below.



Counting Candy Hearts (9)

Name: _____

Date: _____

Count how many candy hearts there are in each group.


1. There are _____ orange hearts in the group below.



2. There are _____ green hearts in the group below.



3. There are _____ blue hearts in the group below.



4. There are _____ pink hearts in the group below.



Counting Candy Hearts (9) Answers

Name: _____

Date: _____

Count how many candy hearts there are in each group.


1. There are 36 orange hearts in the group below.



2. There are 39 green hearts in the group below.



3. There are 27 blue hearts in the group below.



4. There are 25 pink hearts in the group below.

