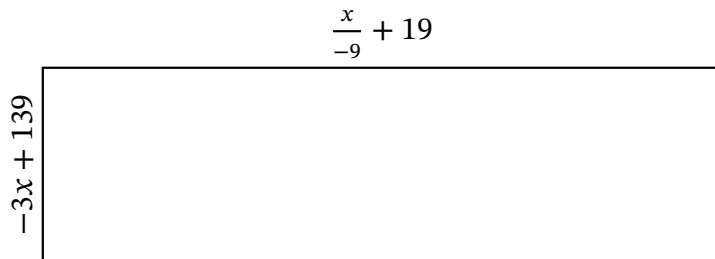


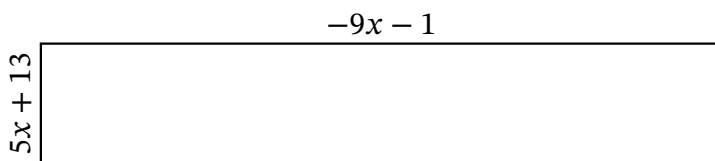
Algebra Rectangles (A)

Name: _____ Date: _____ Score: _____

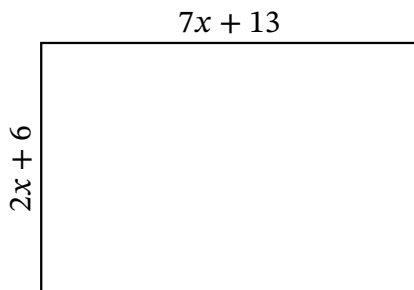
Determine the Value of x, Length, Width and Area for each rectangle.



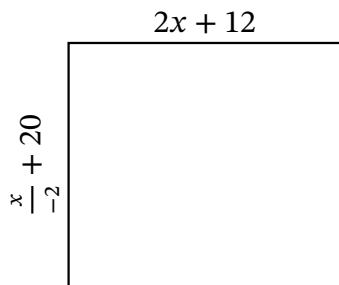
Perimeter: yd
 Value of x: yd
 Length: yd
 Width: yd
 Area: yd²



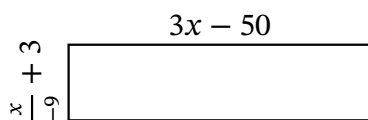
Perimeter: in
 Value of x: in
 Length: in
 Width: in
 Area: in²



Perimeter: km
 Value of x: km
 Length: km
 Width: km
 Area: km²



Perimeter: ft
 Value of x: ft
 Length: ft
 Width: ft
 Area: ft²

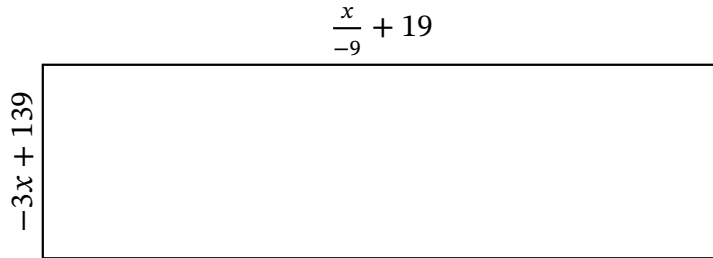


Perimeter: μm
 Value of x: μm
 Length: μm
 Width: μm
 Area: μm²

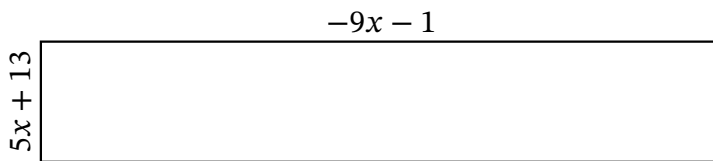
Algebra Rectangles (A) Answers

Name: _____ Date: _____ Score: _____

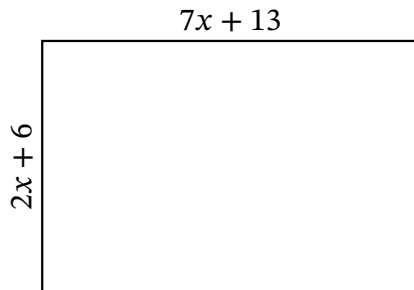
Determine the Value of x , Length, Width and Area for each rectangle.



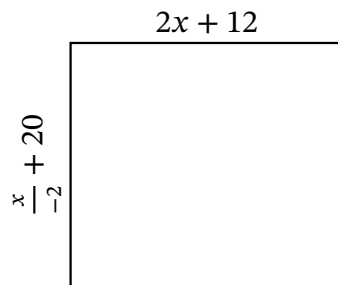
Perimeter: yd
 Value of x : yd
 Length: yd
 Width: yd
 Area: yd^2



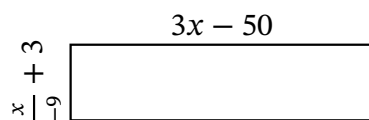
Perimeter: in
 Value of x : in
 Length: in
 Width: in
 Area: in^2



Perimeter: km
 Value of x : km
 Length: km
 Width: km
 Area: km^2



Perimeter: ft
 Value of x : ft
 Length: ft
 Width: ft
 Area: ft^2



Perimeter: μm
 Value of x : μm
 Length: μm
 Width: μm
 Area: μm^2